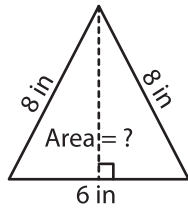


# Area of an Isosceles Triangle

Example:



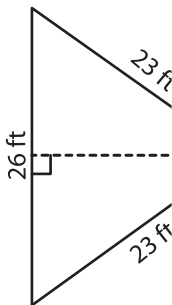
**In an isosceles triangle, altitude drawn to the base is a median.  
Median divides base into equal line segments.**

$$\begin{aligned} \text{height} &= \sqrt{8^2 - 3^2} \\ &= \sqrt{64 - 9} \\ &= \sqrt{55} \text{ in} \end{aligned}$$

$$\begin{aligned} b &= 6 \text{ in}, h = \sqrt{55} \text{ in} \\ \text{Area} &= \frac{1}{2} \times b \times h \\ &= \frac{1}{2} \times 6 \times \sqrt{55} \\ &= 22.25 \text{ in}^2 \end{aligned}$$

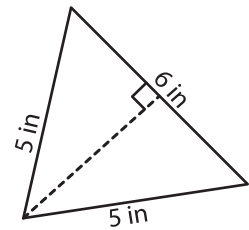
Find the area of each isosceles triangle. Round your answer to two decimal places.

1)



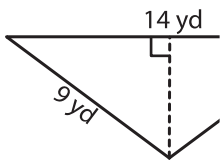
Area =

2)

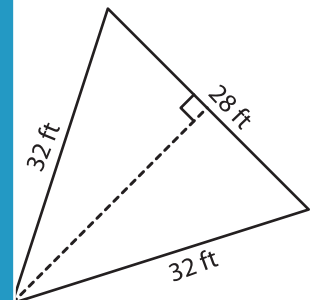


Area =

4)

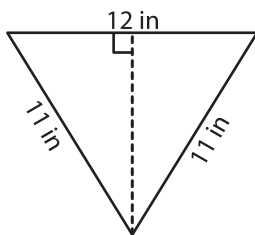


Area =

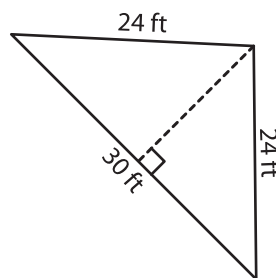


Area =

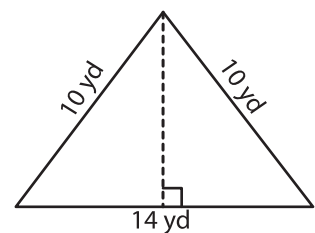
7)



Area =



Area =



Area =

## PREVIEW

Gain complete access to the largest collection of worksheets in all subjects!

Members, please log in to download this worksheet.

Not a member? Please sign up to gain complete access.

www.mathworksheets4kids.com