

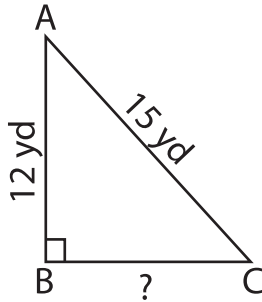
Name : \_\_\_\_\_

## Pythagorean Theorem

Sheet 1

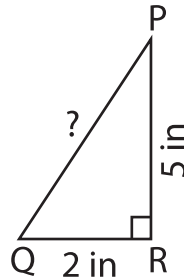
Determine the missing length in each right triangle using the Pythagorean theorem. Round the answer to the nearest tenth.

1)



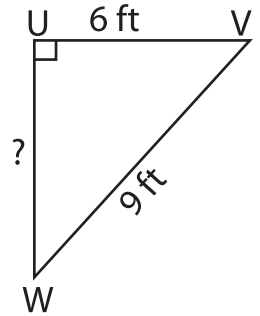
BC = \_\_\_\_\_

2)

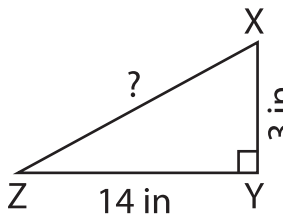


UW = \_\_\_\_\_

3)



4)



XZ = \_\_\_\_\_

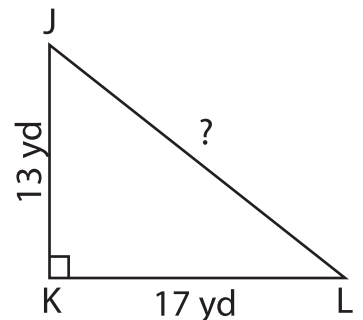
**PREVIEW**

Gain complete access to the largest collection of worksheets in all subjects!

Members, please log in to download this worksheet.

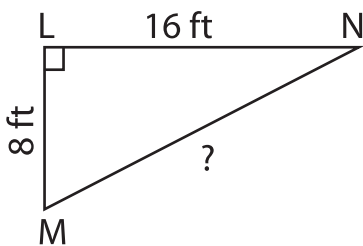
Not a member? Please sign up to gain complete access.

[www.mathworksheets4kids.com](http://www.mathworksheets4kids.com)

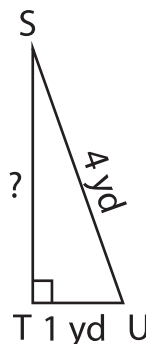


JL = \_\_\_\_\_

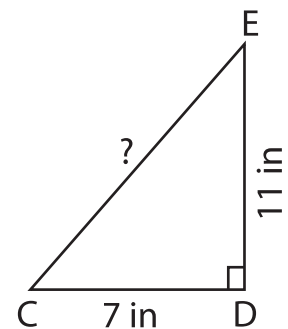
7)



MN = \_\_\_\_\_



ST = \_\_\_\_\_



CE = \_\_\_\_\_