

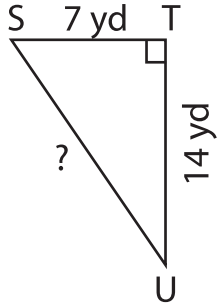
Name : \_\_\_\_\_

## Pythagorean Theorem

Sheet 2

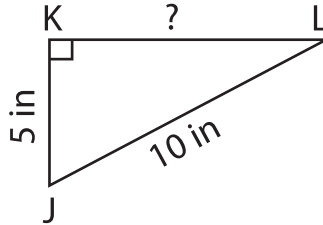
Determine the missing length in each right triangle using the Pythagorean theorem. Round the answer to the nearest tenth.

1)



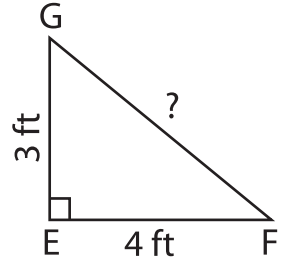
$SU =$  \_\_\_\_\_

2)

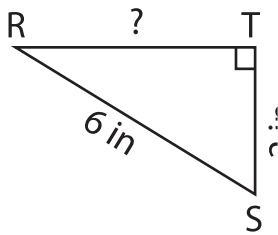


$FG =$  \_\_\_\_\_

3)



4)



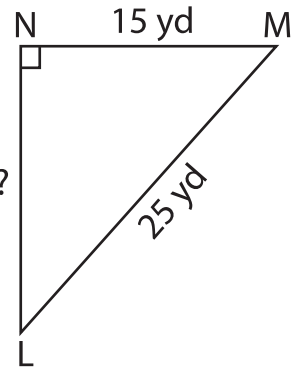
$RT =$  \_\_\_\_\_

Gain complete access to the largest collection of worksheets in all subjects!

Members, please log in to download this worksheet.

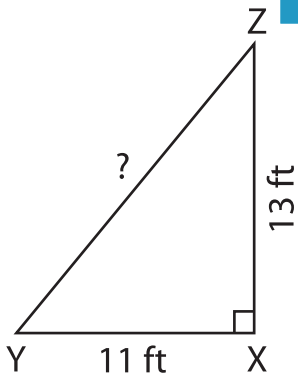
Not a member? Please sign up to gain complete access.

[www.mathworksheets4kids.com](http://www.mathworksheets4kids.com)

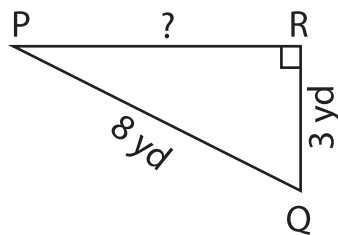


$NL =$  \_\_\_\_\_

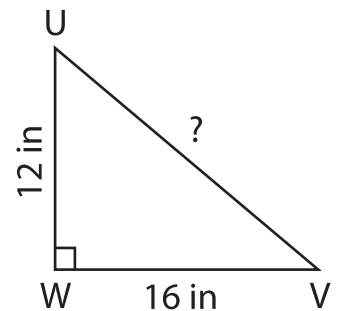
7)



$YZ =$  \_\_\_\_\_



$PR =$  \_\_\_\_\_



$UV =$  \_\_\_\_\_