

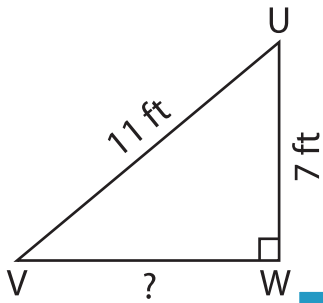
Name : \_\_\_\_\_

## Pythagorean Theorem

Sheet 3

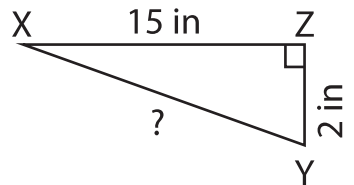
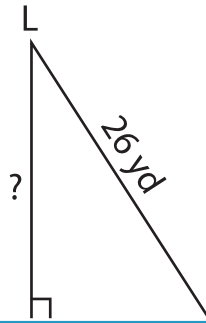
Determine the missing length in each right triangle using the Pythagorean theorem. Round the answer to the nearest tenth.

1)



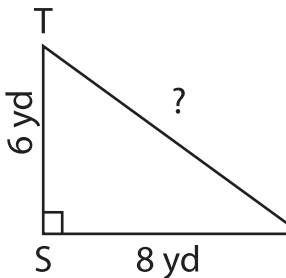
$VW =$  \_\_\_\_\_

2)

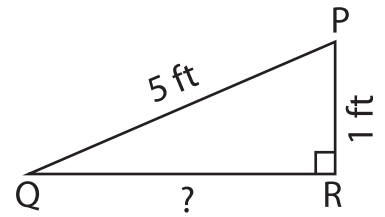


$XY =$  \_\_\_\_\_

4)

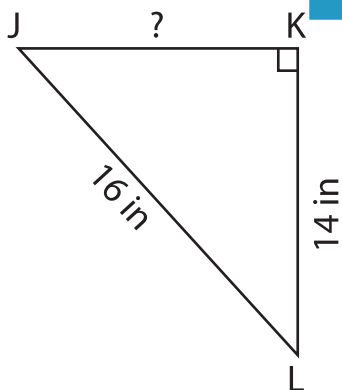


$TU =$  \_\_\_\_\_

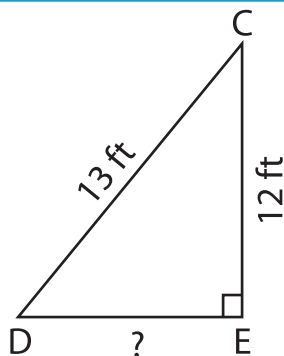


$QR =$  \_\_\_\_\_

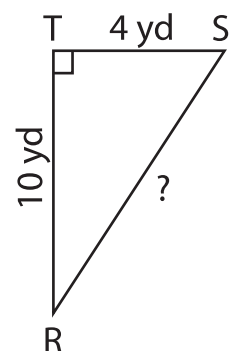
7)



$JK =$  \_\_\_\_\_



$DE =$  \_\_\_\_\_



$RS =$  \_\_\_\_\_

**PREVIEW**

Gain complete access to the largest collection of worksheets in all subjects!

Members, please log in to download this worksheet.

Not a member? Please sign up to gain complete access.

[www.mathworksheets4kids.com](http://www.mathworksheets4kids.com)