

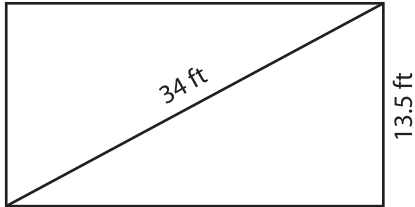
Name : \_\_\_\_\_

## Area of a Rectangle

Sheet 4

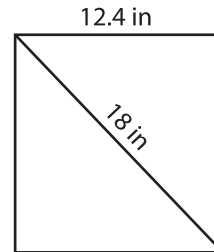
A) Find the area of each rectangle for the given measurements. Round your answer to two decimal places.

1)



Area = \_\_\_\_\_

2)



Area = \_\_\_\_\_

3) The width of a rectangle is 20 yards. What is the area of the rectangle, if the diagonal measures 33 yards?

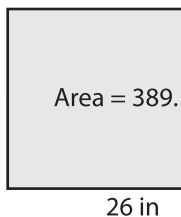
\_\_\_\_\_

4) The length of the diagonal of a rectangle is 33.4 feet. Find the area of the rectangle, if the length is 25 feet.

\_\_\_\_\_

B) Find the length of the diagonal of a rectangle, if the area is 389.1 square inches. Round your answer to the nearest tenth.

1)



Diagonal = \_\_\_\_\_



Diagonal = \_\_\_\_\_

3) The area of a rectangle is 496 square inches. Find the length of the diagonal, if the width is 22 inches.

\_\_\_\_\_

4) The length of a rectangle is 30 yards. If the area of the rectangle is 586.07 square yards, determine the length of the diagonal.

\_\_\_\_\_

**PREVIEW**

Gain complete access to the largest collection of worksheets in all subjects!

Members, please log in to download this worksheet.

Not a member? Please sign up to gain complete access.

[www.mathworksheets4kids.com](http://www.mathworksheets4kids.com)