

Name : _____

Perimeter of a Rectangle

Sheet 4

A) Find the diagonal of each rectangle. Round your answer to the nearest tenth.

1) perimeter = 177 in, length = 53 in

2) perimeter = 95 ft, width = 18.5 ft

Diagonal = _____

Diagonal = _____

3) perimeter = 48 yd, width = 7.6 yd

4) perimeter = 100.4 ft, length = 30.2 ft

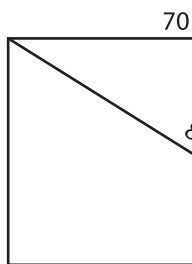
Diagonal = _____

Diagonal = _____

B) Find the perimeter

nearest tenth.

1)

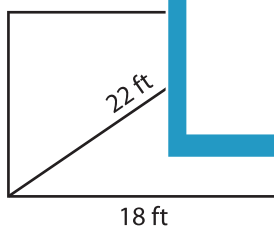


Perimeter = _____

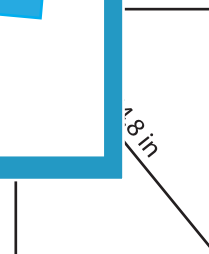


yd

3)



Perimeter = _____



Perimeter = _____

C) What is the perimeter of the rectangle, if the diagonal measures 42.6 yards and its width is 27.3 yards? Round your answer to the nearest tenth.

PREVIEW

Gain complete access to the largest collection of worksheets in all subjects!

Members, please log in to download this worksheet.

Not a member? Please sign up to gain complete access.

www.mathworksheets4kids.com