

Name : _____

Perimeter of a Rectangle

Sheet 5

A) Find the diagonal of each rectangle. Round your answer to the nearest tenth.

1) perimeter = 88 yd, width = 19.4 yd

2) perimeter = 240 yd, length = 70 yd

Diagonal = _____

Diagonal = _____

3) perimeter = 133.5 ft, length = 41.3 ft

4) perimeter = 82 in, width = 18 in

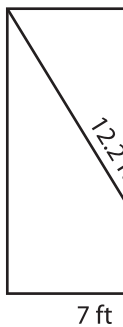
Diagonal = _____

Diagonal = _____

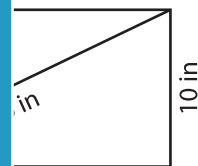
B) Find the perimeter

nearest tenth.

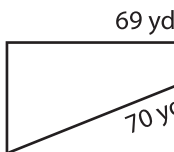
1)



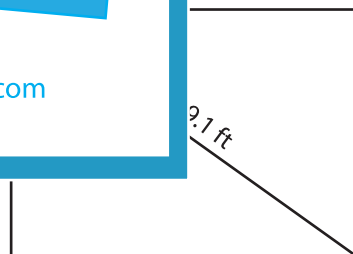
Perimeter = _____



3)



Perimeter = _____



Perimeter = _____

C) The perimeter of a rectangle is 142 inches. If the length of the rectangle is 45.3 inches, find the length of the diagonal. Round your answer to the nearest tenth.

PREVIEW

Gain complete access to the largest collection of worksheets in all subjects!

Members, please log in to download this worksheet.

Not a member? Please sign up to gain complete access.

www.mathworksheets4kids.com