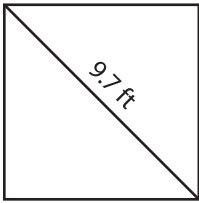


Name : \_\_\_\_\_

## Area of a Square

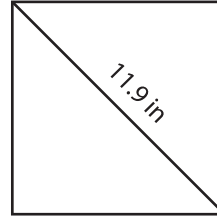
A) Find the area of each square. Round your answer to the nearest hundredth.

1)



Area = \_\_\_\_\_

2)



Area = \_\_\_\_\_

3) The diagonal of a square is 10.5 units. Find the area of the square.

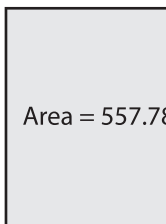
\_\_\_\_\_

4) What is the area of a square with a diagonal of 12 units?

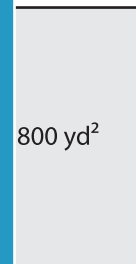
\_\_\_\_\_

B) Find the length of the diagonal of a square with an area of 800 yd<sup>2</sup>. Round your answer to the nearest tenth.

5)



Diagonal = \_\_\_\_\_



7) A square has an area of 75.65 square inches. Find the length of the diagonal.

\_\_\_\_\_

8) The area of a square is 648 square feet. Determine the length of the diagonal.

\_\_\_\_\_

**PREVIEW**

Gain complete access to the largest collection of worksheets in all subjects!

Members, please log in to download this worksheet.

Not a member? Please sign up to gain complete access.

[www.mathworksheets4kids.com](http://www.mathworksheets4kids.com)