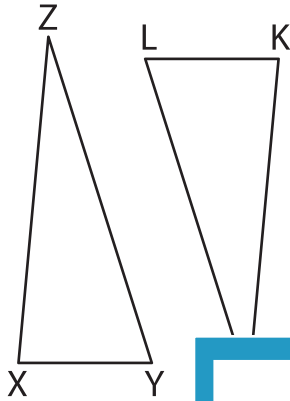


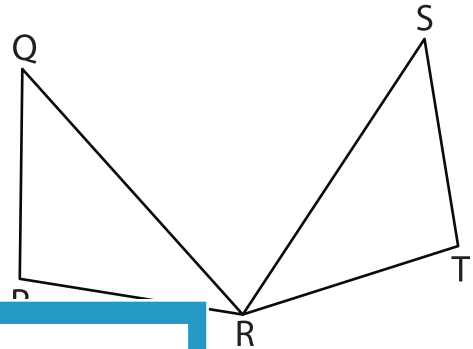
Congruent Triangles

Indicate the corresponding sides and angles for each congruence statement.

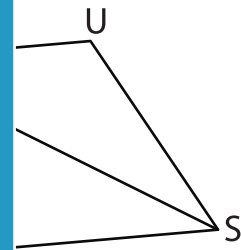
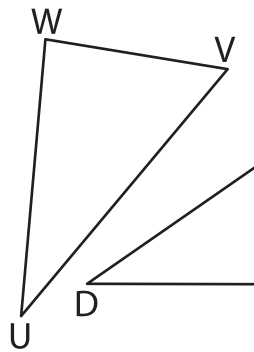
1) $\triangle XYZ \cong \triangle K LJ$



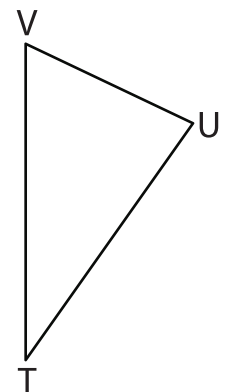
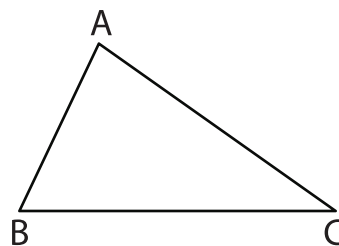
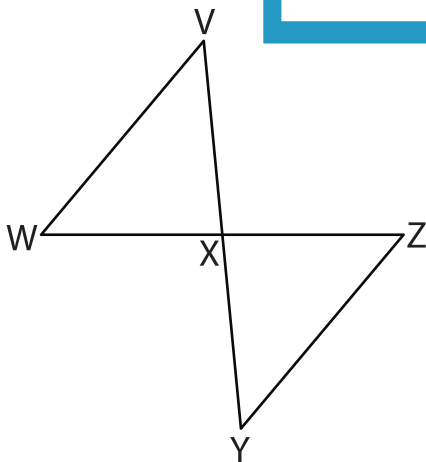
2) $\triangle PQR \cong \triangle TSR$



3) $\triangle UVW \cong \triangle DEF$



5) $\triangle VWX \cong \triangle YZX$



PREVIEW

Gain complete access to the largest collection of worksheets in all subjects!

Members, please log in to download this worksheet.

Not a member? Please sign up to gain complete access.

www.mathworksheets4kids.com