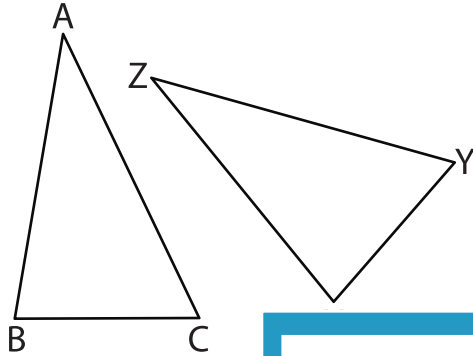


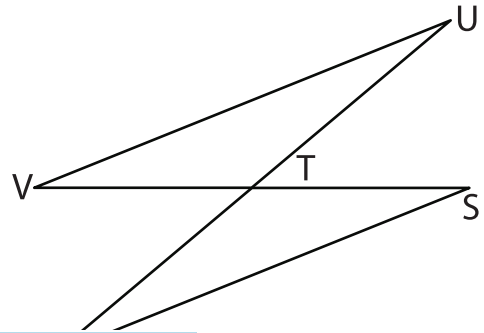
Congruent Triangles

Indicate the corresponding sides and angles for each congruence statement.

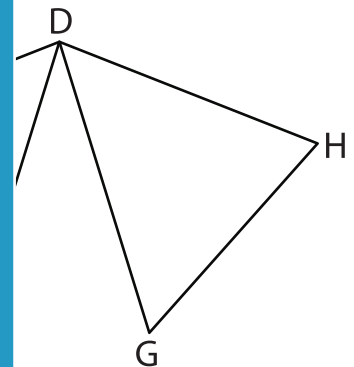
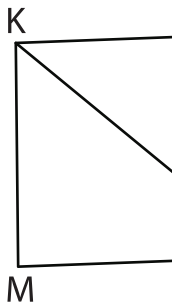
1) $\triangle ABC \cong \triangle ZXY$



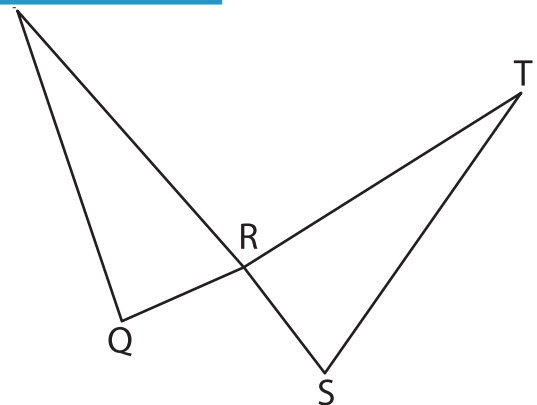
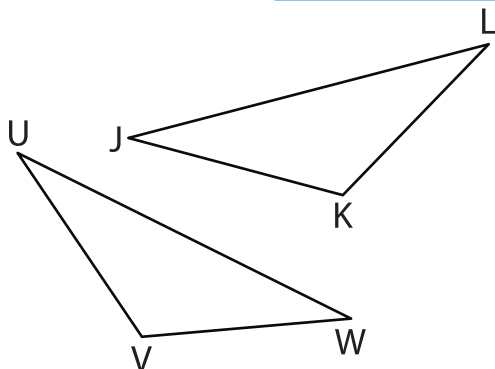
2) $\triangle RST \cong \triangle UVT$



3) $\triangle KLM \cong \triangle LKN$



5) $\triangle VWU \cong \triangle KLJ$



PREVIEW

Gain complete access to the largest collection of worksheets in all subjects!

Members, please log in to download this worksheet.

Not a member? Please sign up to gain complete access.

www.mathworksheets4kids.com