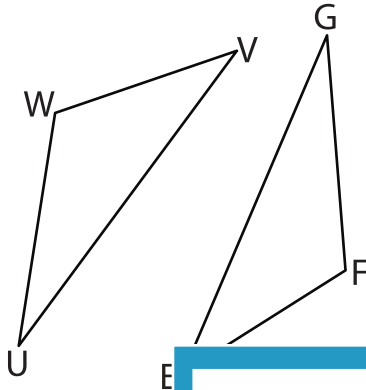


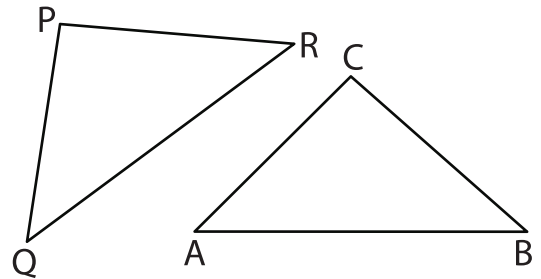
# Congruent Triangles

Indicate the corresponding sides and angles for each congruence statement.

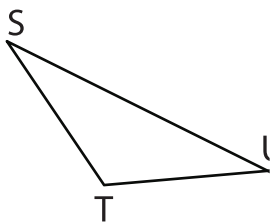
1)  $\triangle UVW \cong \triangle GEF$



2)  $\triangle PQR \cong \triangle CAB$



3)  $\triangle TUS \cong \triangle VUW$



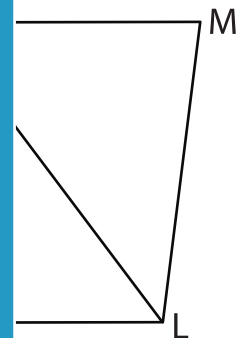
## PREVIEW

Gain complete access to the largest collection of worksheets in all subjects!

Members, please log in to download this worksheet.

Not a member? Please sign up to gain complete access.

[www.mathworksheets4kids.com](http://www.mathworksheets4kids.com)



5)  $\triangle UVW \cong \triangle DEF$

