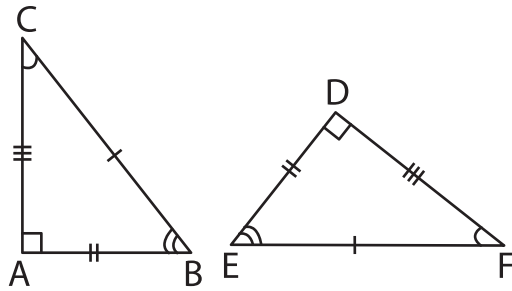


# Congruence Statements

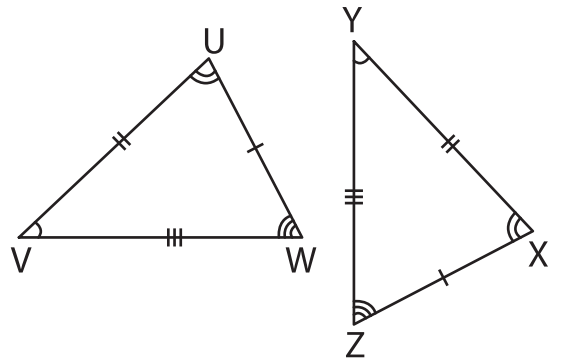
Complete the congruence statement for each pair of triangles.

1)



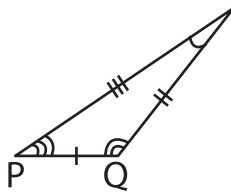
$\triangle ABC \cong$  \_\_\_\_\_

2)

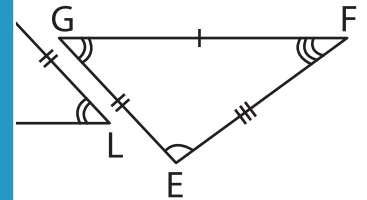


$\triangle UVW \cong$  \_\_\_\_\_

3)

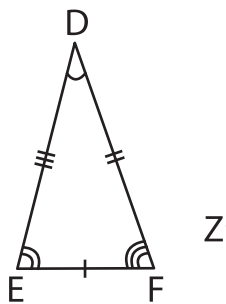


$\triangle PQR \cong$  \_\_\_\_\_

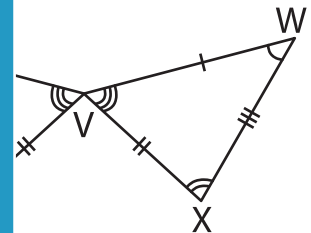


\_\_\_\_\_

5)



$\triangle DEF \cong$  \_\_\_\_\_



\_\_\_\_\_

## PREVIEW

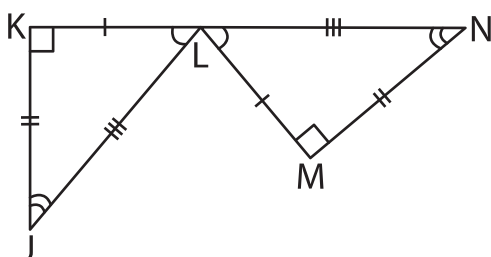
Gain complete access to the largest collection of worksheets in all subjects!

Members, please log in to download this worksheet.

Not a member? Please sign up to gain complete access.

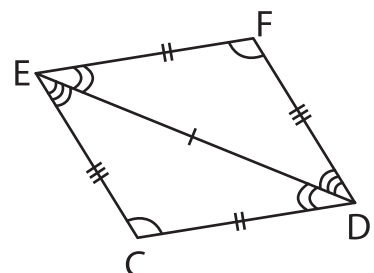
[www.mathworksheets4kids.com](http://www.mathworksheets4kids.com)

7)



$\triangle JKL \cong$  \_\_\_\_\_

8)



$\triangle CDE \cong$  \_\_\_\_\_