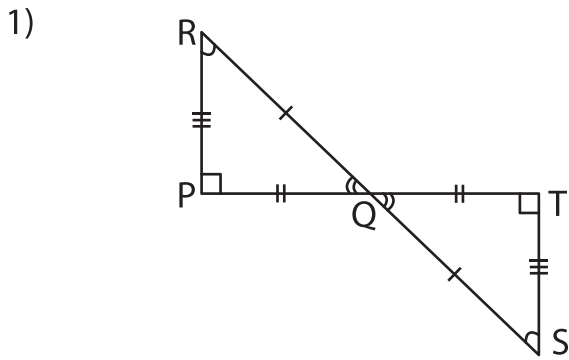
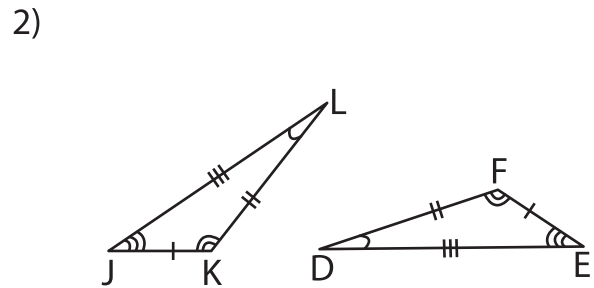


# Congruence Statements

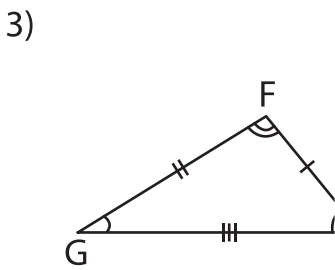
Complete the congruence statement for each pair of triangles.



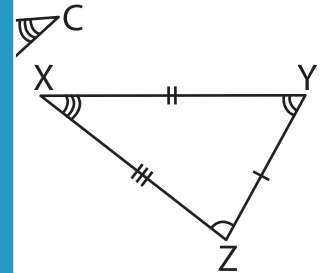
$\triangle PQR \cong$  \_\_\_\_\_



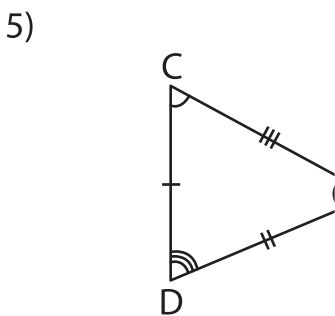
$\triangle JKL \cong$  \_\_\_\_\_



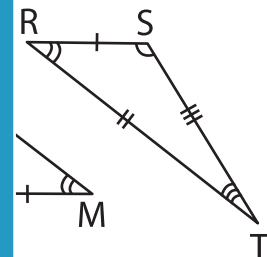
$\triangle FGH \cong$  \_\_\_\_\_



\_\_\_\_\_



$\triangle CDE \cong$  \_\_\_\_\_



\_\_\_\_\_

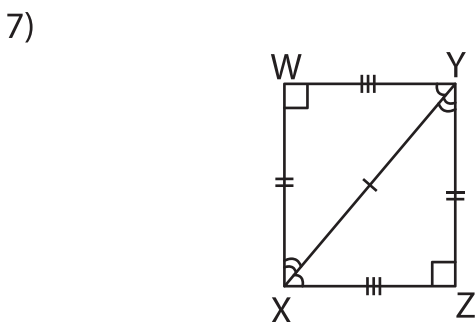
## PREVIEW

Gain complete access to the largest collection of worksheets in all subjects!

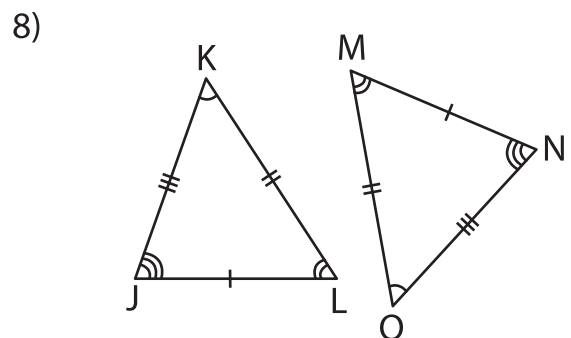
Members, please log in to download this worksheet.

Not a member? Please sign up to gain complete access.

[www.mathworksheets4kids.com](http://www.mathworksheets4kids.com)



$\triangle WXY \cong$  \_\_\_\_\_



$\triangle JKL \cong$  \_\_\_\_\_