

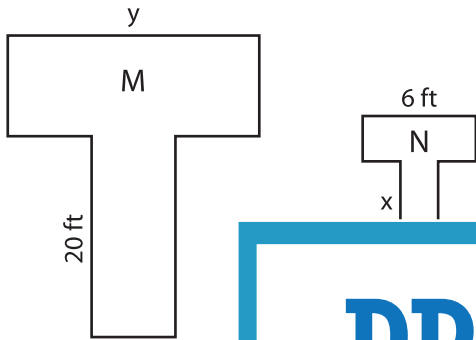
Name : _____

Scale Factor - Finding Sides

L1S3

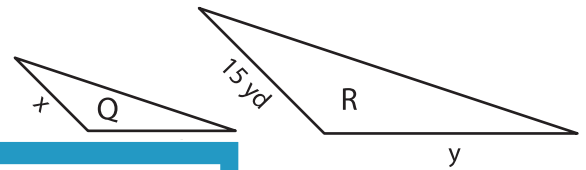
Find x and y.

1) Scale factor of N to M is 1 : 4



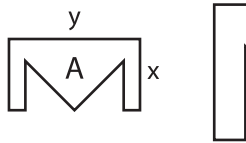
x = _____ ;

2) Scale factor of Q to R is 1 : 5



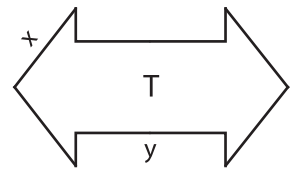
_____ ; y = _____

3) Scale factor of B to A is 3 : 1



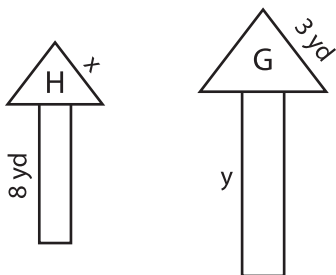
x = _____ ;

Scale factor of S to T is 3 : 1



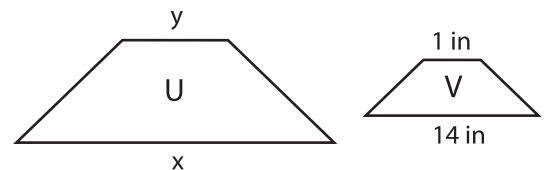
_____ ; y = _____

5) Scale factor of H to G is 3 : 1



x = _____ ; y = _____

Scale factor of U to V is 6 : 1



x = _____ ; y = _____

PREVIEW

Gain complete access to the largest collection of worksheets in all subjects!

Members, please log in to download this worksheet.

Not a member? Please sign up to gain complete access.

www.mathworksheets4kids.com