

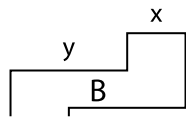
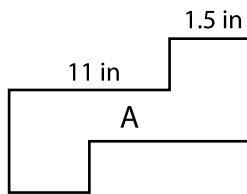
Name : _____

Scale Factor - Finding Sides

L2S1

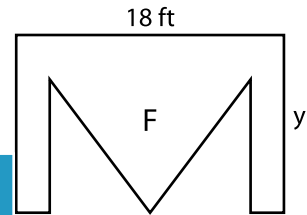
Find x and y.

1) Scale factor of A to B is $1 : \frac{1}{5}$



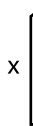
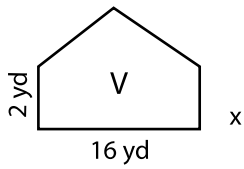
x = _____ ;

2) Scale factor of E to F is $1 : 3$



_____ ; y = _____

3) Scale factor of W to V is $0.6 : 1$



x = _____ ;

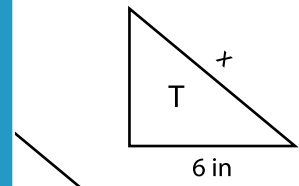
Gain complete access to the largest collection of worksheets in all subjects!

Members, please log in to download this worksheet.

Not a member? Please sign up to gain complete access.

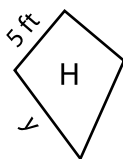
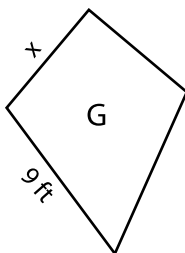
www.mathworksheets4kids.com

Scale factor of S to T is $0.6 : 1$

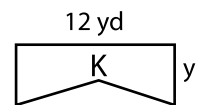
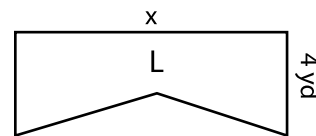


_____ ; y = _____

5) Scale factor of G to H is $\frac{1}{2} : 1$



x = _____ ; y = _____



x = _____ ; y = _____