

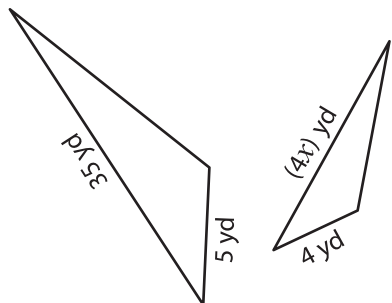
Name : _____

Similar Triangles

T1S2

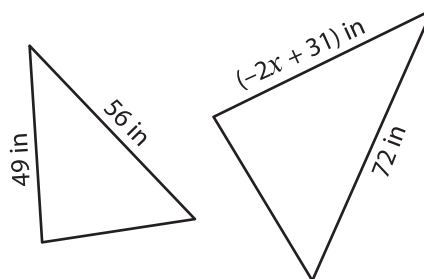
Find the value of x , if each pair of triangles is similar.

1)



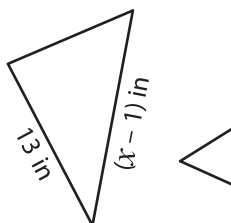
$x =$ _____

2)



$x =$ _____

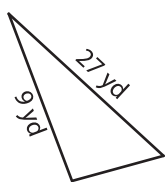
3)



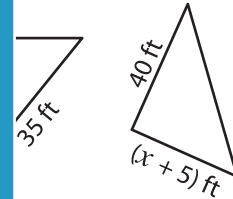
$x =$ _____



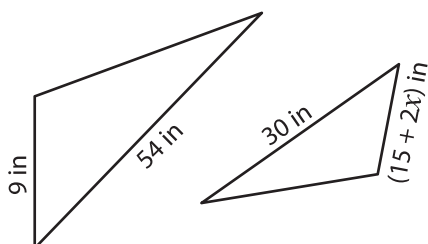
5)



$x =$ _____

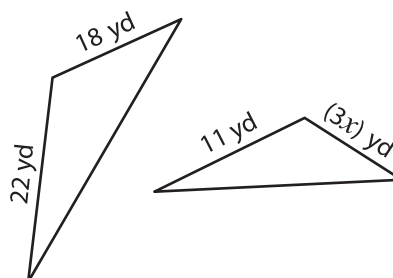


7)



$x =$ _____

8)



$x =$ _____

PREVIEW

Gain complete access to the largest collection of worksheets in all subjects!

Members, please log in to download this worksheet.

Not a member? Please sign up to gain complete access.

www.mathworksheets4kids.com