

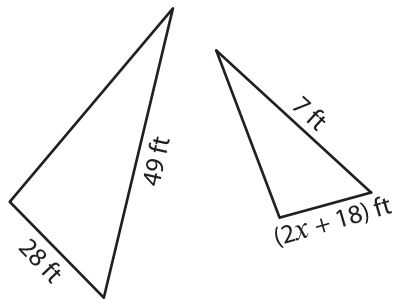
Name : \_\_\_\_\_

# Similar Triangles

T1S3

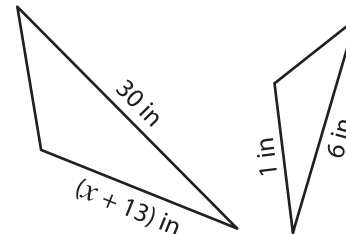
Find the value of  $x$ , if each pair of triangles is similar.

1)



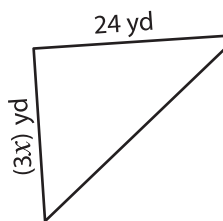
$x =$  \_\_\_\_\_

2)



$x =$  \_\_\_\_\_

3)



$x =$  \_\_\_\_\_

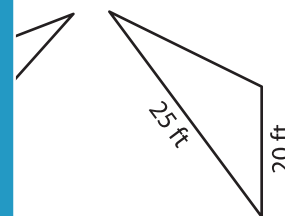
**PREVIEW**

Gain complete access to the largest collection of worksheets in all subjects!

Members, please log in to download this worksheet.

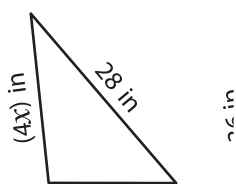
Not a member? Please sign up to gain complete access.

[www.mathworksheets4kids.com](http://www.mathworksheets4kids.com)

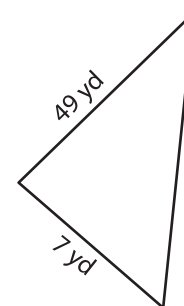


\_\_\_\_\_

5)

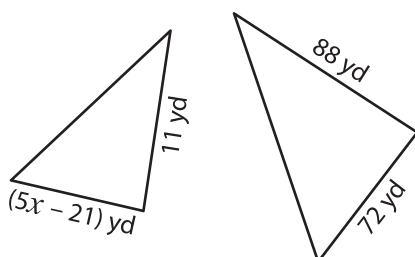


$x =$  \_\_\_\_\_



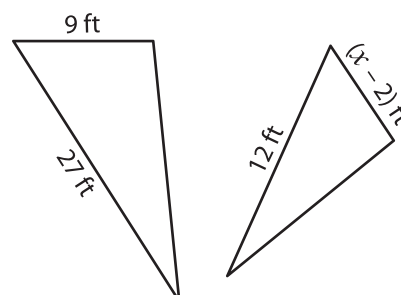
\_\_\_\_\_

7)



$x =$  \_\_\_\_\_

8)



$x =$  \_\_\_\_\_