

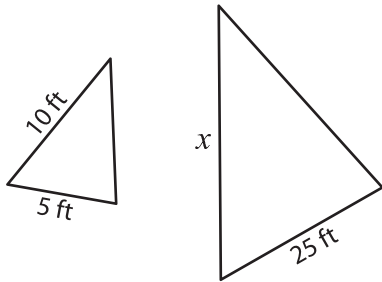
Name : _____

Similar Triangles - Missing Sides

T1S1

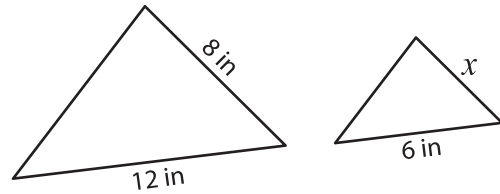
A) Find the value of x , if each pair of triangles is similar.

1)



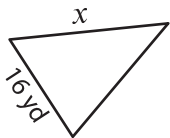
$x =$ _____

2)



$x =$ _____

3)



$x =$ _____

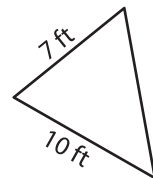
PREVIEW

Gain complete access to the largest collection of worksheets in all subjects!

Members, please log in to download this worksheet.

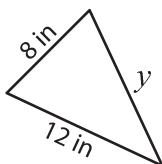
Not a member? Please sign up to gain complete access.

www.mathworksheets4kids.com

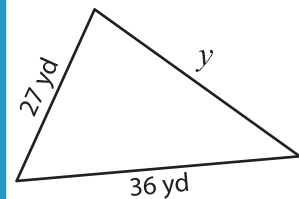


B) Find the values of

5)



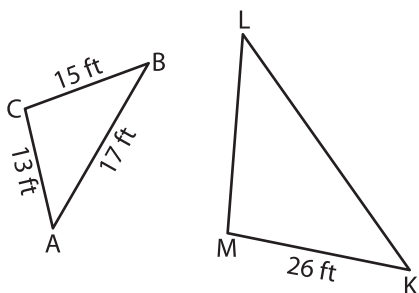
$x =$ _____ ;



; $y =$ _____

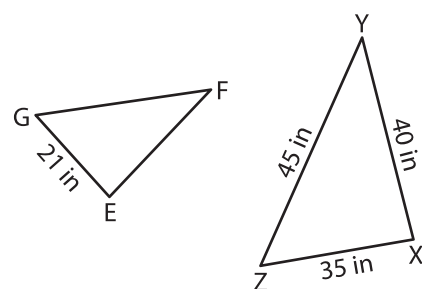
C) Each pair of triangles is similar. Find the perimeter.

1)



Perimeter of $\triangle KLM =$ _____

2)



Perimeter of $\triangle EFG =$ _____