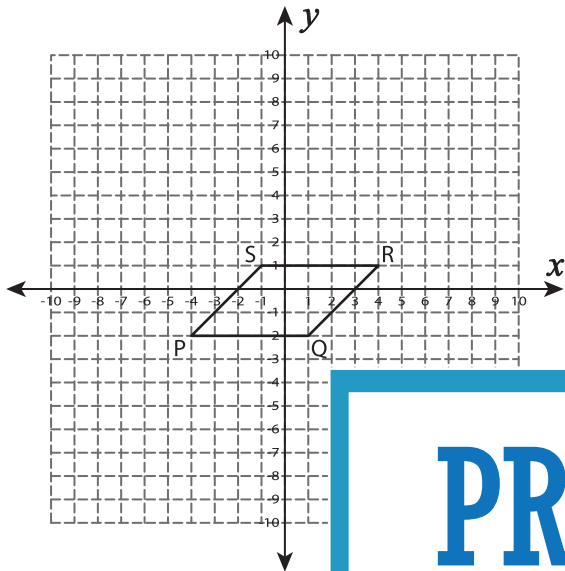


# Dilated Coordinates

Find the dilated coordinates with the given scale factor. Also draw the dilated image.

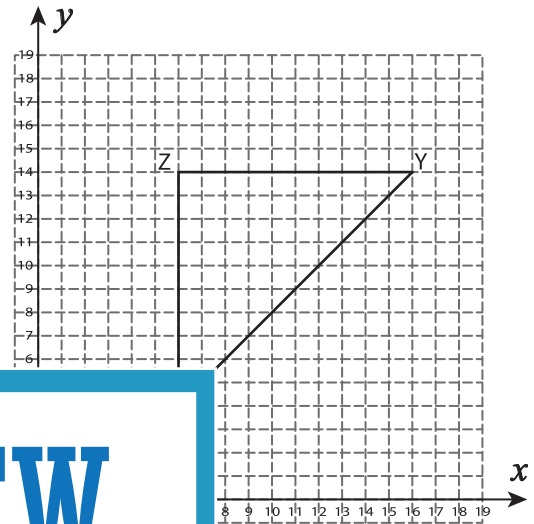
1) Scale factor = 2



P' : \_\_\_\_\_ ,

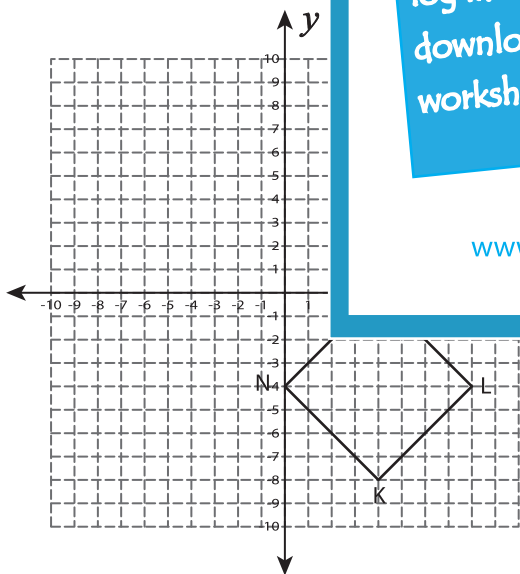
R' : \_\_\_\_\_ ,

2) Scale factor = 0.5



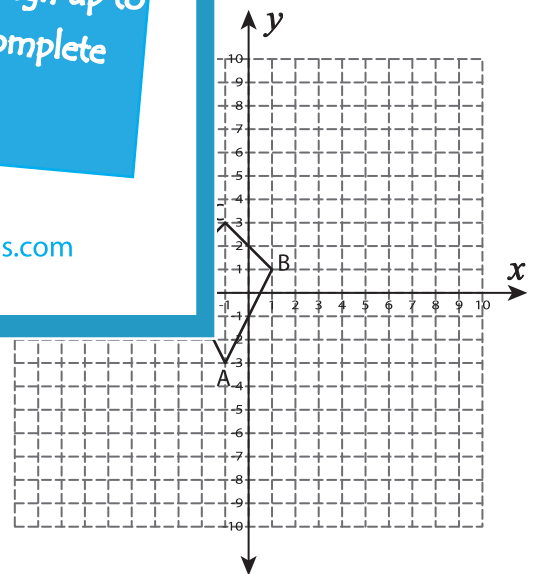
Y' : \_\_\_\_\_

3) Scale factor =  $\frac{1}{4}$



K' : \_\_\_\_\_ , L' : \_\_\_\_\_

M' : \_\_\_\_\_ , N' : \_\_\_\_\_



A' : \_\_\_\_\_ , B' : \_\_\_\_\_

C' : \_\_\_\_\_ , D' : \_\_\_\_\_

## PREVIEW

Gain complete access to the largest collection of worksheets in all subjects!

Members, please log in to download this worksheet.

Not a member? Please sign up to gain complete access.

[www.mathworksheets4kids.com](http://www.mathworksheets4kids.com)