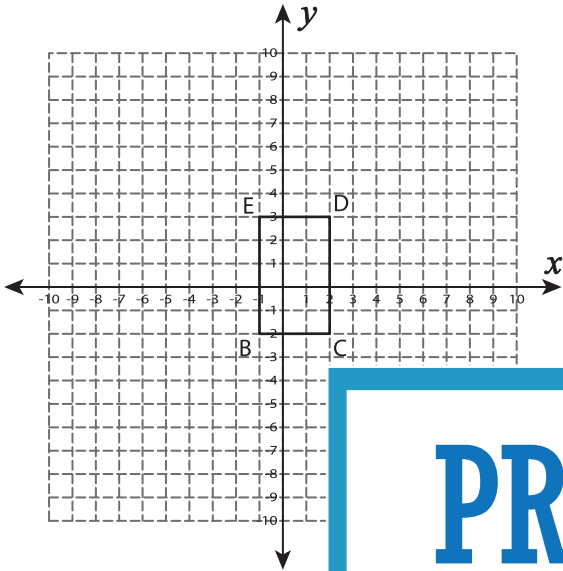


Dilated Coordinates

Find the dilated coordinates with the given scale factor. Also draw the dilated image.

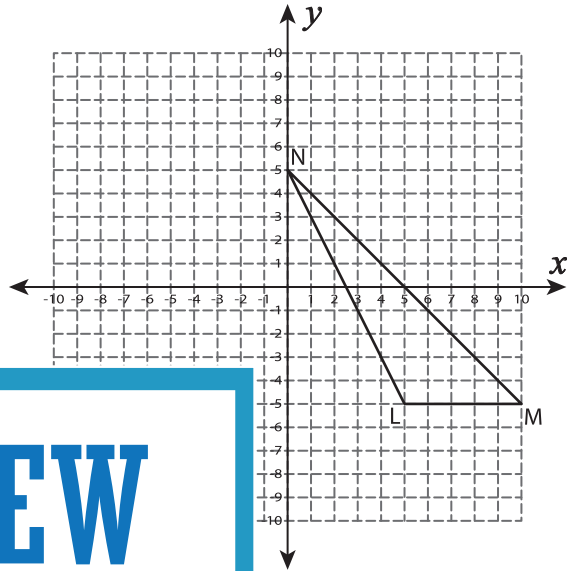
1) Scale factor = 3



B' : _____ ,

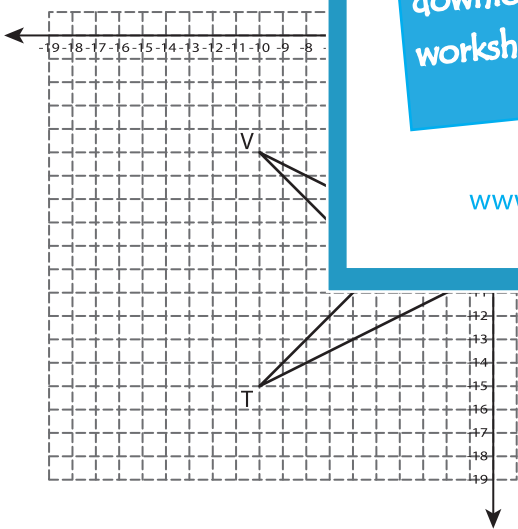
D' : _____ ,

2) Scale factor = $\frac{1}{5}$



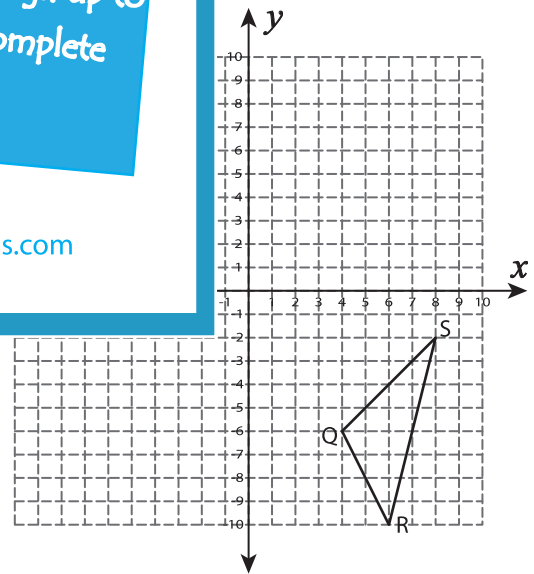
M' : _____

3) Scale factor = 1.2



T' : _____ , U' : _____

V' : _____ , W' : _____



Q' : _____ , R' : _____

S' : _____

PREVIEW

Gain complete access to the largest collection of worksheets in all subjects!

Members, please log in to download this worksheet.

Not a member? Please sign up to gain complete access.

www.mathworksheets4kids.com