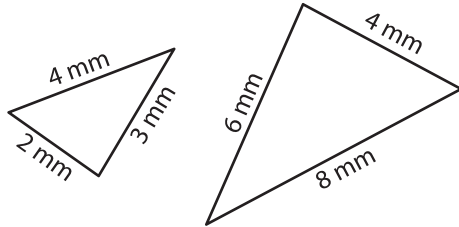


# Similarity of Triangles

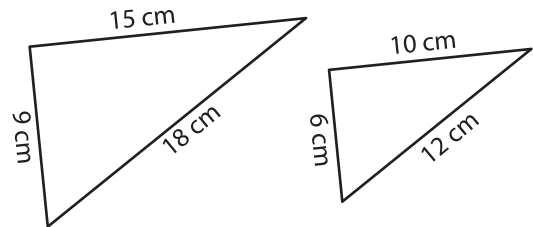
Write whether each pair of triangles are similar.

1)



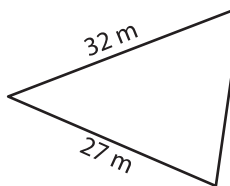
\_\_\_\_\_

2)



\_\_\_\_\_

3)



\_\_\_\_\_

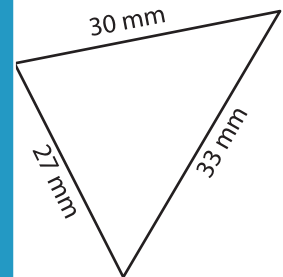
## PREVIEW

Gain complete access to the largest collection of worksheets in all subjects!

Members, please log in to download this worksheet.

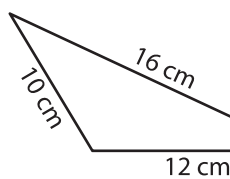
Not a member? Please sign up to gain complete access.

[www.mathworksheets4kids.com](http://www.mathworksheets4kids.com)

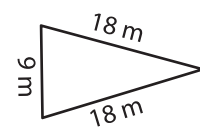


\_\_\_\_\_

5)

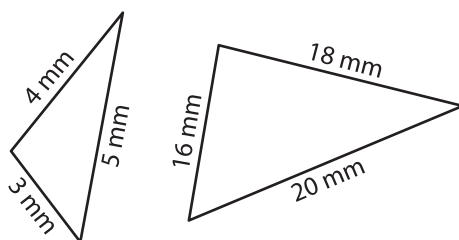


\_\_\_\_\_



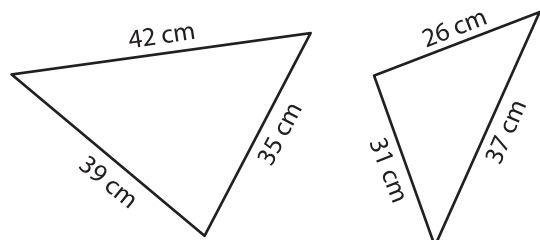
\_\_\_\_\_

7)



\_\_\_\_\_

8)



\_\_\_\_\_