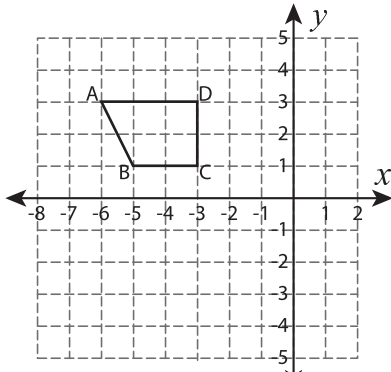


Write the New Coordinates

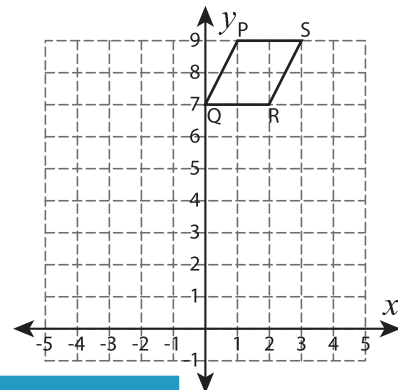
Graph the image of each figure after the given reflection. Also write the coordinates of the image.

1) Reflection across the line $x = -2$



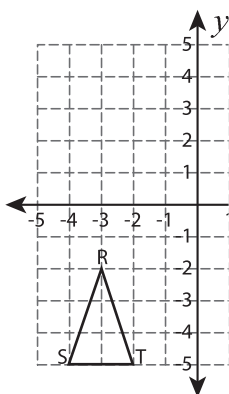
A' : _____ , B' : _____
C' : _____ , D' : _____

2) Reflection across the line $y = 5$



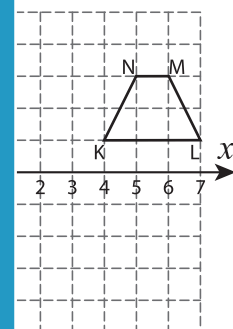
Q' : _____
S' : _____

3) Reflection across the line $x = 2$



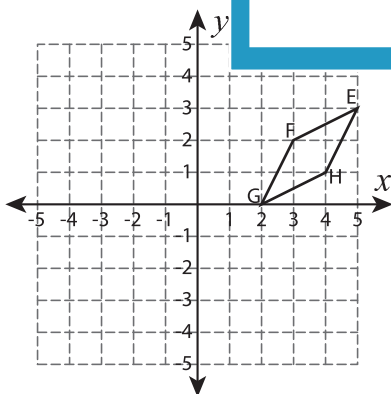
R' : _____ , S' : _____
T' : _____

Reflection across the line $x = 2$

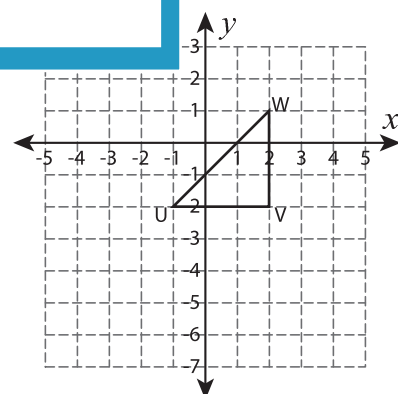


L' : _____
N' : _____

5) Reflection across the line $y = -3$



E' : _____ , F' : _____
G' : _____ , H' : _____



U' : _____ , V' : _____
W' : _____

PREVIEW

Gain complete access to the largest collection of worksheets in all subjects!

Members, please log in to download this worksheet.

Not a member? Please sign up to gain complete access.

www.mathworksheets4kids.com