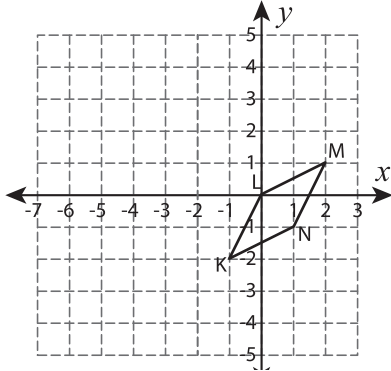


Write the New Coordinates

Graph the image of each figure after the given reflection. Also write the coordinates of the image.

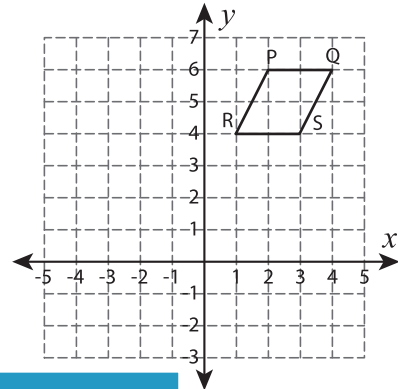
1) Reflection across the line $x = -2$



K' : _____ , L' : _____

M' : _____ , N' : _____

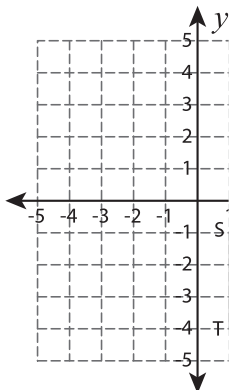
2) Reflection across the line $y = 4$



Q' : _____

S' : _____

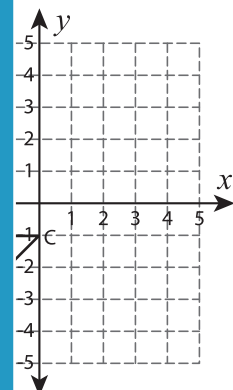
3) Reflection across the line $x = 1$



S' : _____ , T' : _____

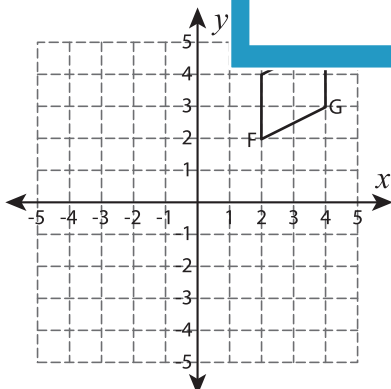
U' : _____ , V' : _____

4) Reflection across the line $y = -3$



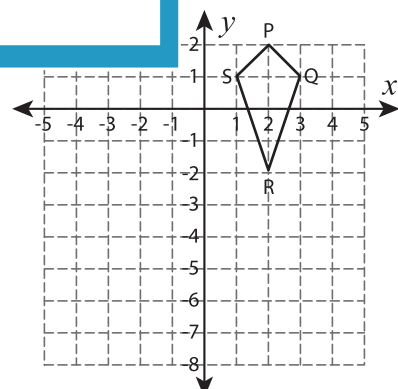
C' : _____

5) Reflection across the line $y = -3$



E' : _____ , F' : _____

G' : _____ , H' : _____



P' : _____ , Q' : _____

R' : _____ , S' : _____

PREVIEW

Gain complete access to the largest collection of worksheets in all subjects!

Members, please log in to download this worksheet.

Not a member? Please sign up to gain complete access.

www.mathworksheets4kids.com