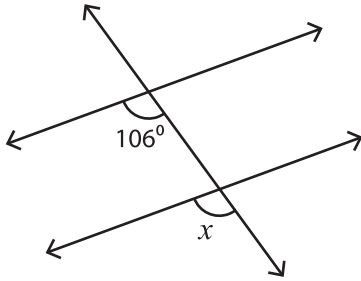


# Corresponding Angles

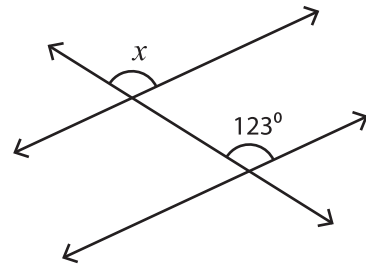
Find the value of each indicated angle.

1)



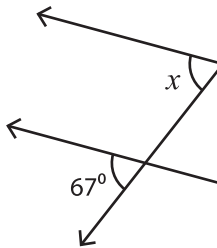
$x =$  \_\_\_\_\_

2)

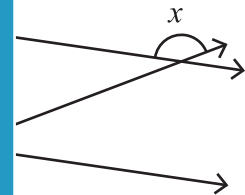


$x =$  \_\_\_\_\_

3)

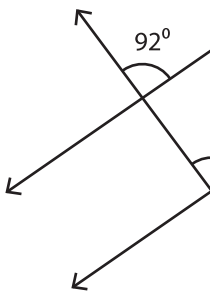


$x =$  \_\_\_\_\_

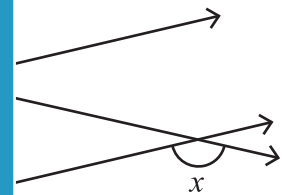


\_\_\_\_\_

5)



$x =$  \_\_\_\_\_



\_\_\_\_\_

## PREVIEW

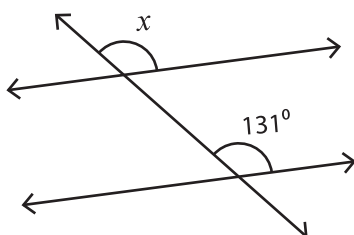
Gain complete access to the largest collection of worksheets in all subjects!

Members, please log in to download this worksheet.

Not a member? Please sign up to gain complete access.

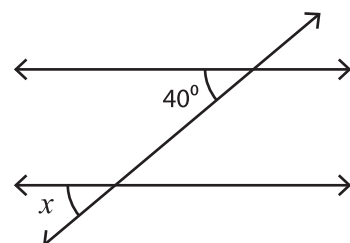
[www.mathworksheets4kids.com](http://www.mathworksheets4kids.com)

7)



$x =$  \_\_\_\_\_

8)



$x =$  \_\_\_\_\_