

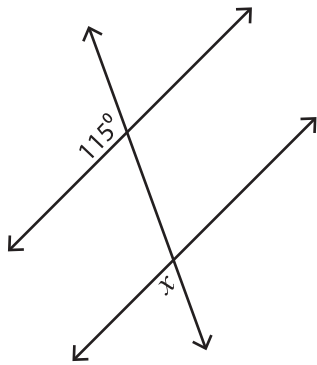
Name : \_\_\_\_\_

# Exterior Angles

ES1

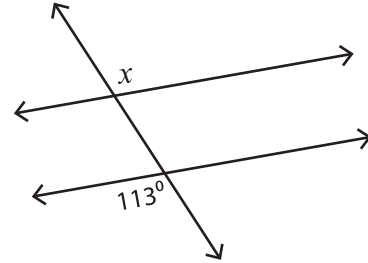
Find the value of each indicated angle.

1)



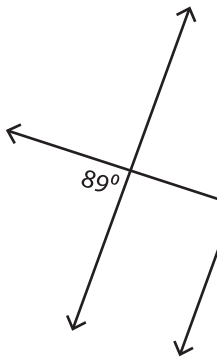
$x =$  \_\_\_\_\_

2)



$x =$  \_\_\_\_\_

3)



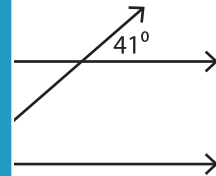
$x =$  \_\_\_\_\_

**PREVIEW**  
Gain complete access to the largest collection of worksheets in all subjects!

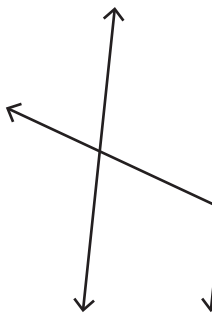
Members, please log in to download this worksheet.

Not a member? Please sign up to gain complete access.

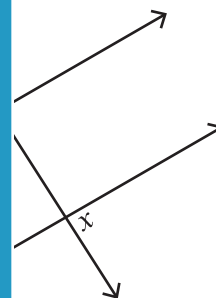
[www.mathworksheets4kids.com](http://www.mathworksheets4kids.com)



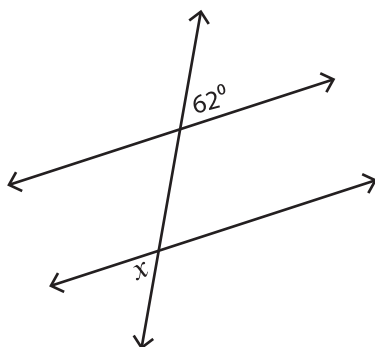
5)



$x =$  \_\_\_\_\_

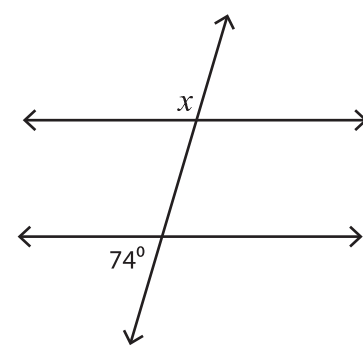


7)



$x =$  \_\_\_\_\_

8)



$x =$  \_\_\_\_\_