

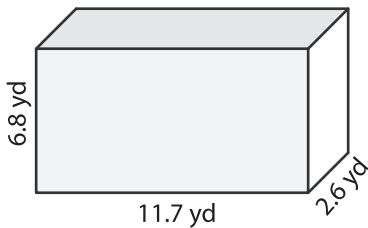
Name : _____

Decimals: L1S3

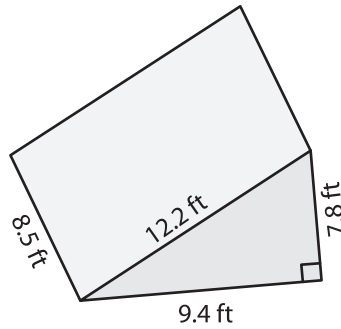
Surface Area of Prisms & Cylinders

Find the surface area of each shape. Round your answer to two decimal places.
(use $\pi = 3.14$)

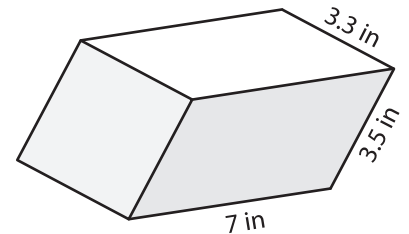
1)



2)



3)



Surface Area = _____

Surface Area = _____

PREVIEW

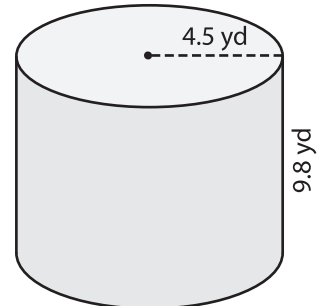
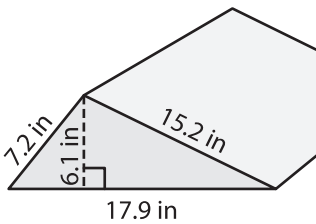
Gain complete access to the largest collection of worksheets in all subjects!

Members, please log in to download this worksheet.

Not a member? Please sign up to gain complete access.

www.mathworksheets4kids.com

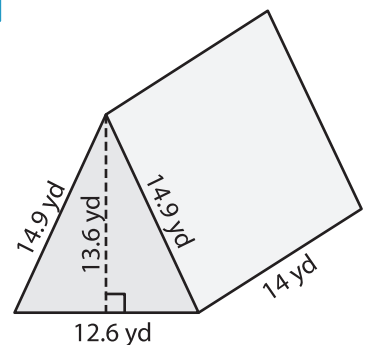
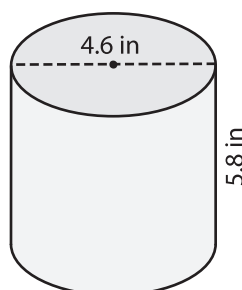
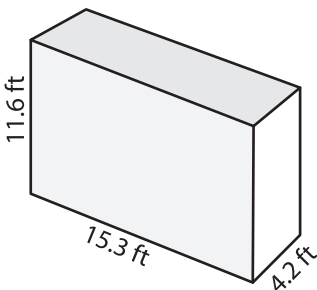
4)



Surface Area = _____

Surface Area = _____

7)



Surface Area = _____

Surface Area = _____

Surface Area = _____