

Name : _____

Surface Area - Sphere & Hemisphere

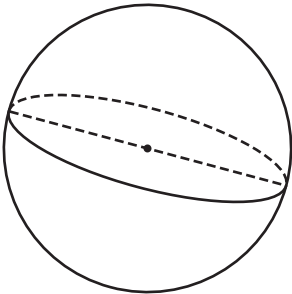
Sheet 3

Find the indicated measure. (use $\pi = 3.14$)

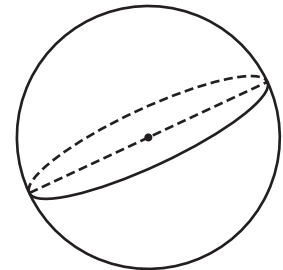
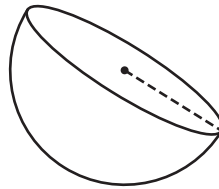
1) Surface Area = 254.34 yd^2

2) Surface Area = 3052.08 in^2

3) Surface Area = 28.26 ft^2



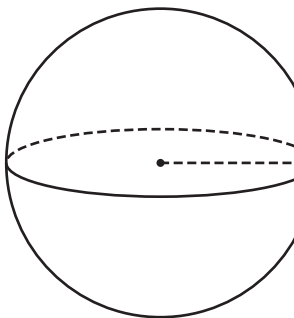
diameter = _____



diameter = _____

4) Surface Area = 5024 in^2

Surface Area = 37.68 ft^2

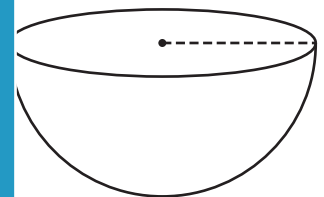


radius = _____

PREVIEW
Gain complete access to the largest
collection of worksheets in all subjects!

Members, please
log in to
download this
worksheet.

Not a member?
Please sign up to
gain complete
access.



radius = _____

7) The surface area of a sp

phere. (use $\pi = 3.14$)

www.mathworksheets4kids.com

8) What is the radius of the sphere whose surface area is $3,629.84$ square inches? (use $\pi = 3.14$)