

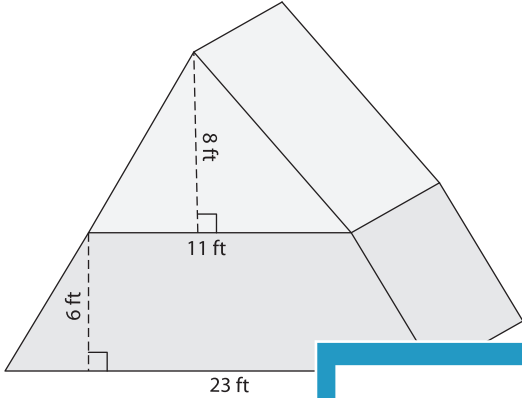
Name : _____

Volume - Composite Shapes

L1S2

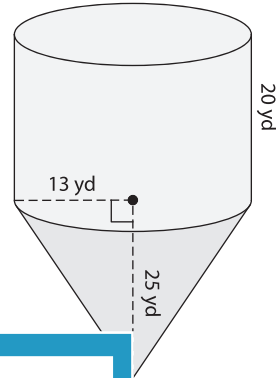
Find the volume of each solid shape. Round your answer to two decimal places.(use $\pi = 3.14$)

1)



Volume = _____

2)



PREVIEW

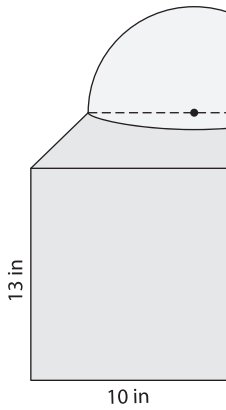
Gain complete access to the largest collection of worksheets in all subjects!

Members, please log in to download this worksheet.

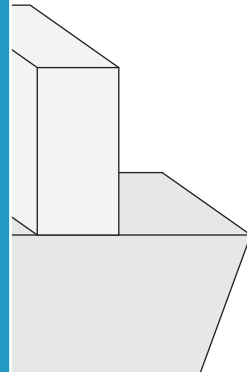
Not a member? Please sign up to gain complete access.

www.mathworksheets4kids.com

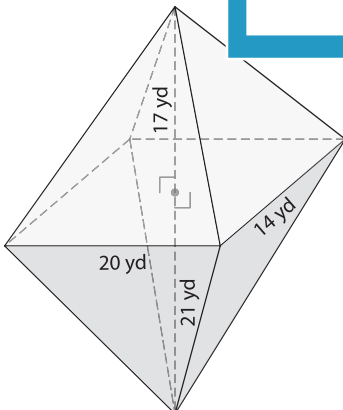
3)



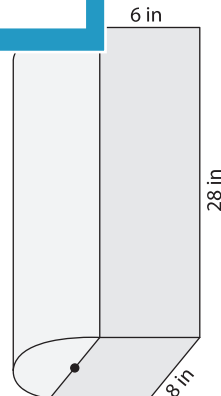
Volume = _____



5)



Volume = _____



Volume = _____