

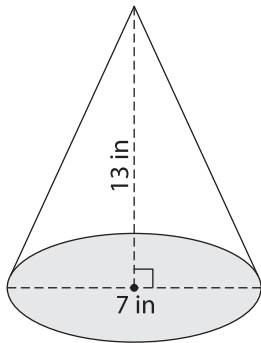
Name : _____

Volume - Cones and Pyramids

Integers: S1

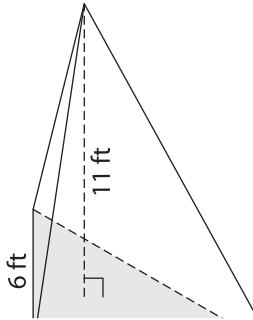
Find the volume of each shape. Round your answer to two decimal places. (use $\pi = 3.14$)

1)

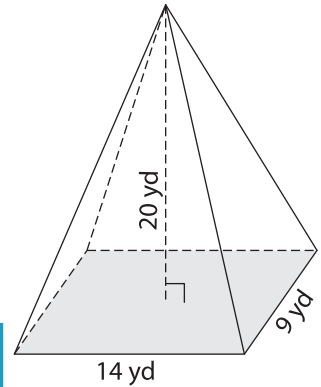


Volume = _____

2)

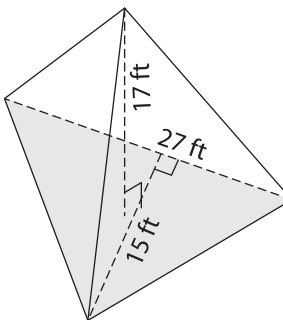


3)



Volume = _____

4)



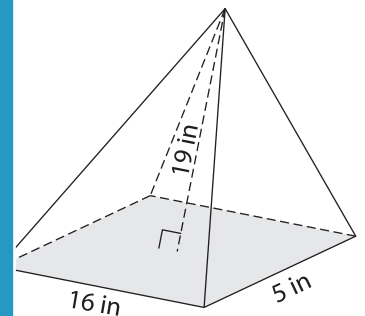
Volume = _____

PREVIEW
Gain complete access to the largest collection of worksheets in all subjects!

Members, please log in to download this worksheet.

Not a member? Please sign up to gain complete access.

www.mathworksheets4kids.com



Volume = _____

7) The base of a pyramid is a square with a side length of 23 feet, what is its volume?

8) Determine the volume of a pyramid with a square base of side length 10 feet and a height of 12 feet. If the height of the pyramid is 12 feet, what is its volume?

8) Determine the volume of a cone whose radius is 12 yards and height is 5 yards. (use $\pi = 3.14$)
