

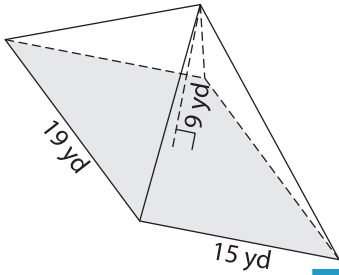
Name : _____

Volume - Cones and Pyramids

Integers: S3

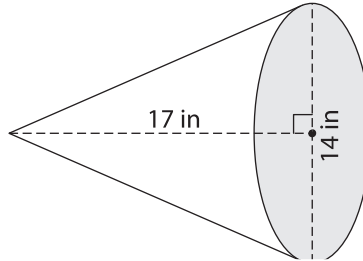
Find the volume of each shape. Round your answer to two decimal places. (use $\pi = 3.14$)

1)



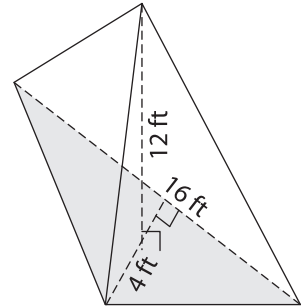
Volume = _____

2)

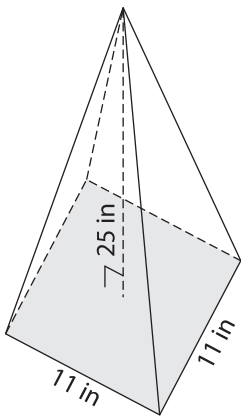


Volume = _____

3)



4)



Volume = _____

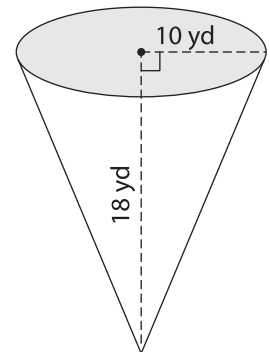
PREVIEW

Gain complete access to the largest collection of worksheets in all subjects!

Members, please log in to download this worksheet.

Not a member? Please sign up to gain complete access.

www.mathworksheets4kids.com



Volume = _____

7) The length, width and height of a rectangular prism are 12 yards, 8 yards and 3 yards respectively. What is the volume of the prism?

8) The base of a pyramid is a triangle with a base of 23 inches and a height of 22 inches. If the height of the pyramid is 20 inches, find its volume. Round your answer to two decimal places.
