

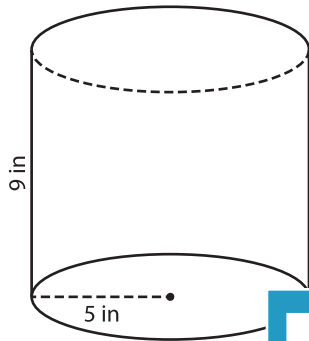
Name : _____

Integers: MS1

Volume - Cylinder

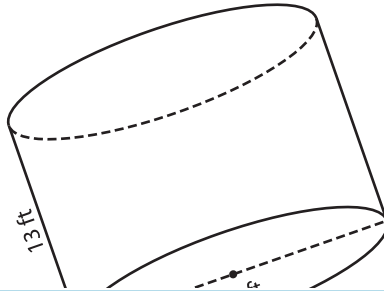
A) Find the volume of each cylinder. (use $\pi = 3.14$)

1)



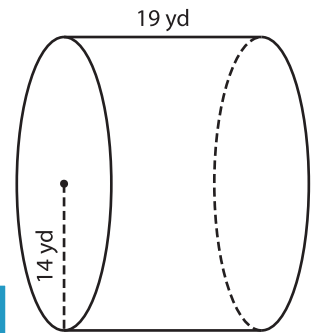
Volume = _____

2)



Volume = _____

3)



Volume = _____

B) Find the volume of each cylinder. (use $\pi = 3.14$)

4) height = 25 in ; radius = 3 in

Volume = _____

6) diameter = 8 yd ; height = 17 in

Volume = _____

Gain complete access to the largest collection of worksheets in all subjects!

Members, please log in to download this worksheet.

Not a member? Please sign up to gain complete access.

www.mathworksheets4kids.com

Volume = _____

8) A cylindrical fuel storage tank has a diameter of 19 feet. Determine the capacity of the tank, if its height is 34 feet. (use $\pi = 3.14$)