

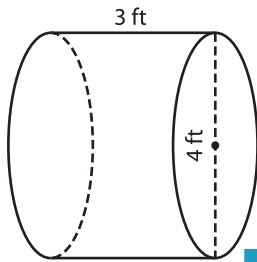
Name : _____

Volume - Cylinder

Integers: MS2

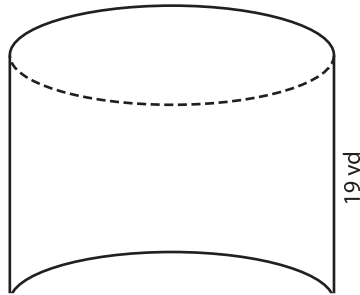
A) Find the volume of each cylinder. (use $\pi = 3.14$)

1)



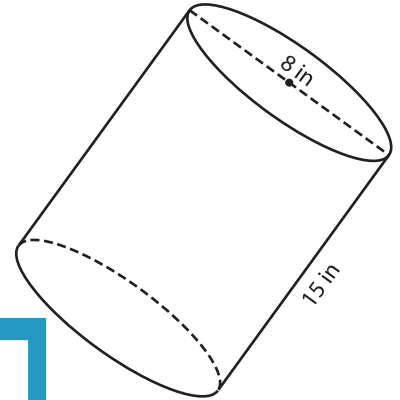
Volume = _____

2)



Volume = _____

3)



Volume = _____

B) Find the volume of each cylinder.

4) diameter = 28 ft ; height = 18 yd

Volume = _____

6) height = 11 in ; radius = 14 ft

Volume = _____

Gain complete access to the largest collection of worksheets in all subjects!

Members, please log in to download this worksheet.

Not a member? Please sign up to gain complete access.

www.mathworksheets4kids.com

Volume = _____

8) The diameter and height of a cylindrical jar are both 7 inches. What is the volume of the jar? Round your answer to two decimal places. (use $\pi = 3.14$)
