

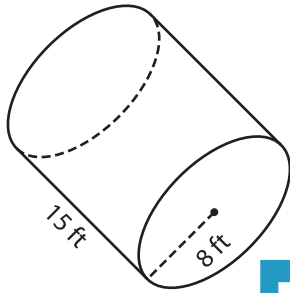
Name : \_\_\_\_\_

## Volume - Cylinder

Integers: MS5

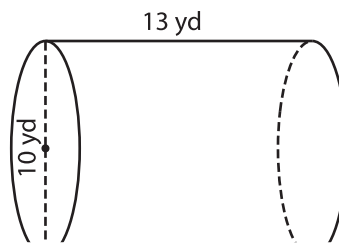
A) Find the volume of each cylinder. (use  $\pi = 3.14$ )

1)



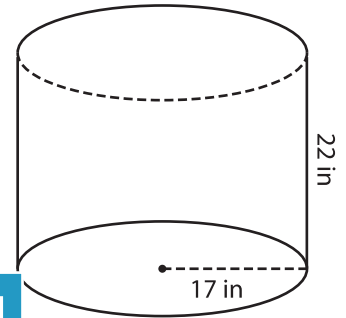
Volume = \_\_\_\_\_

2)



Volume = \_\_\_\_\_

3)



Volume = \_\_\_\_\_

B) Find the volume of each cylinder. (use  $\pi = 3.14$ )

4) height = 16 ft ; radius = 5 ft

Volume = \_\_\_\_\_

6) radius = 19 in ; height = 14 yd

Volume = \_\_\_\_\_

Volume = \_\_\_\_\_

8) An oil drum is half-filled with crude oil. The diameter of the drum is 22 inches and the height 33 inches. What is the volume of the part of the drum containing oil? (use  $\pi = 3.14$ )

\_\_\_\_\_

**PREVIEW**

Gain complete access to the largest collection of worksheets in all subjects!

Members, please log in to download this worksheet.

Not a member? Please sign up to gain complete access.

[www.mathworksheets4kids.com](http://www.mathworksheets4kids.com)