

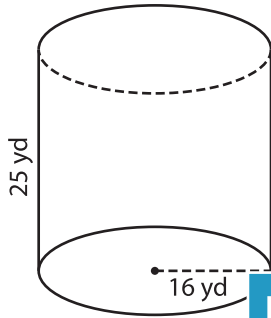
Name : _____

Volume - Cylinder

Integers: MS6

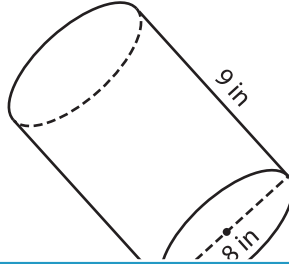
A) Find the volume of each cylinder. (use $\pi = 3.14$)

1)



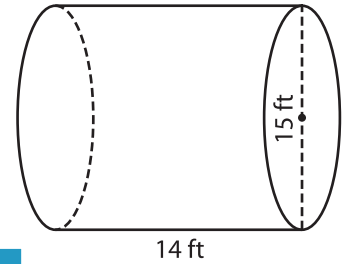
Volume = _____

2)



Volume = _____

3)



Volume = _____

B) Find the volume of each cylinder. (use $\pi = 3.14$)

4) height = 10 yd ; diameter = 16 yd

Volume = _____

6) diameter = 22 ft ; height = 29 in

Volume = _____

radius = 24 yd

Volume = _____

8) A handmade bamboo flower vase has a height of 10 inches and diameter of 5 inches. Find the volume of the vase. (use $\pi = 3.14$)

PREVIEW

Gain complete access to the largest collection of worksheets in all subjects!

Members, please log in to download this worksheet.

Not a member? Please sign up to gain complete access.

www.mathworksheets4kids.com