

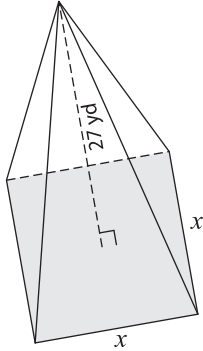
Name : _____

Volume - Pyramids

Sheet 3

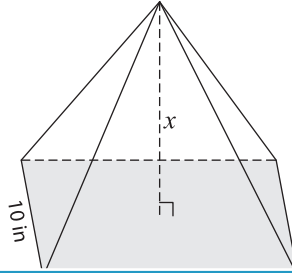
Find the value of x .

1) Volume = $4,356 \text{ yd}^3$



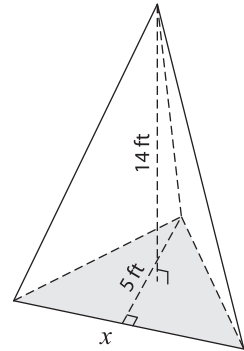
$x =$ _____

2) Volume = 680 in^3

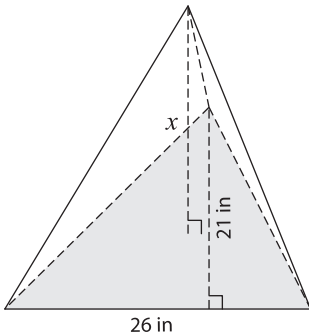


$x =$ _____

3) Volume = 105 ft^3

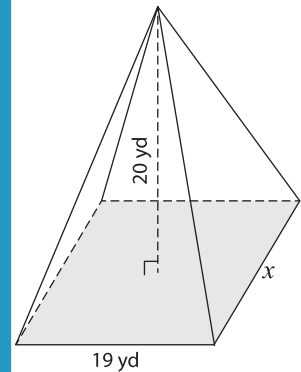


4) Volume = $2,002 \text{ in}^3$



$x =$ _____

Volume = $1,900 \text{ yd}^3$



$x =$ _____

7) The width and height of a rectangular pyramid are 12 in and 15 in, respectively. Find the length of the base.

8) The volume of a square pyramid is 768 cubic inches. If the side length of the base square is 12 inches, determine the height of the pyramid.

PREVIEW

Gain complete access to the largest collection of worksheets in all subjects!

Members, please log in to download this worksheet.

Not a member? Please sign up to gain complete access.

www.mathworksheets4kids.com