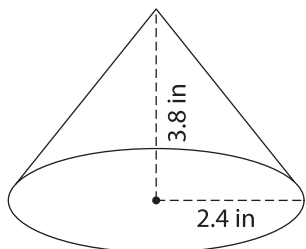


Name : _____

Volume - Mixed Shapes

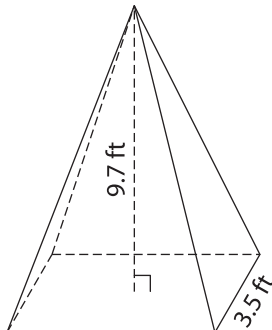
Find the volume of each shape. Round your answer to two decimal places. (use $\pi = 3.14$)

1)

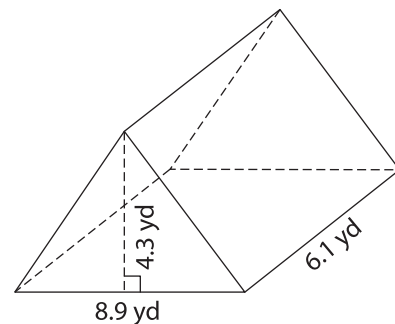


Volume = _____

2)

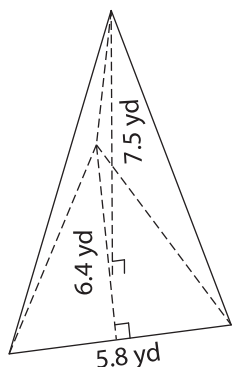


3)

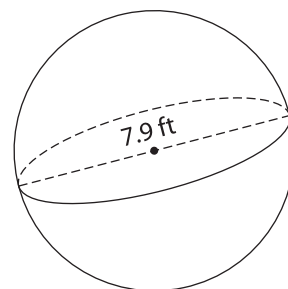


Volume = _____

4)



Volume = _____



Volume = _____

7) A rectangular prism has a volume of 123.45 cubic yards. The length of the prism is 5.8 yards. What is the width of the prism? Round your answer to two decimal places.

8) A rectangular prism has a length of 8.8 yards. What is the width of the prism? Round your answer to two decimal places.

8) The radius of a hemisphere is 2.5 feet. Determine the volume. Round your answer to two decimal places. (use $\pi = 3.14$)

PREVIEW

Gain complete access to the largest collection of worksheets in all subjects!

Members, please log in to download this worksheet.

Not a member? Please sign up to gain complete access.

www.mathworksheets4kids.com