

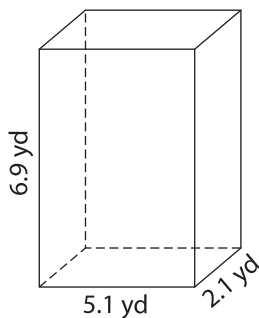
Name : _____

Decimals: L1S3

Volume - Mixed Shapes

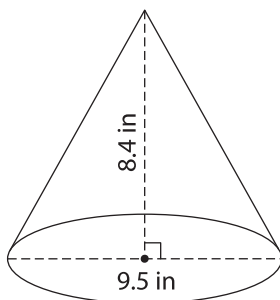
Find the volume of each shape. Round your answer to two decimal places. (use $\pi = 3.14$)

1)

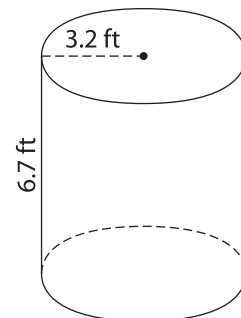


Volume = _____

2)

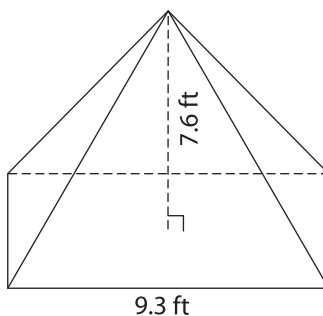


3)



Volume = _____

4)



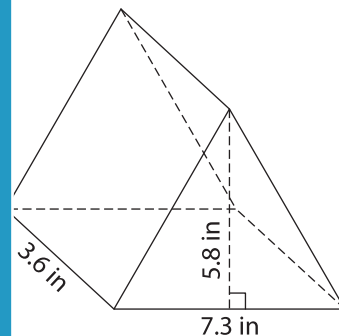
Volume = _____

PREVIEW
Gain complete access to the largest collection of worksheets in all subjects!

Members, please log in to download this worksheet.

Not a member? Please sign up to gain complete access.

www.mathworksheets4kids.com



Volume = _____

7) What is the volume of a sphere with a radius of 4.5 ft? Round your answer to two decimal places. (use $\pi = 3.14$)

Round your answer to two decimal places.

8) The base of a pyramid is a triangle whose base is 6.1 yards and height is 5.3 yards. If the height of the pyramid is 7.5 yards, find its volume. Round your answer to two decimal places.