

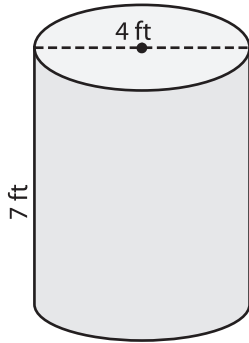
Name : _____

Volume - Prisms and Cylinders

Integers: L1S2

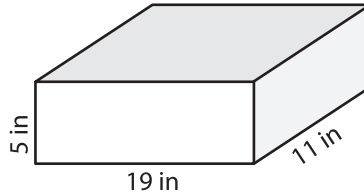
Find the volume of each shape. (use $\pi = 3.14$)

1)

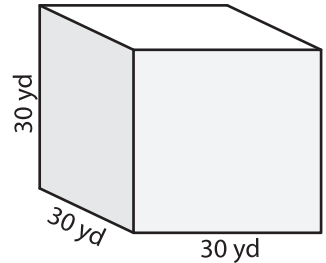


Volume = _____

2)

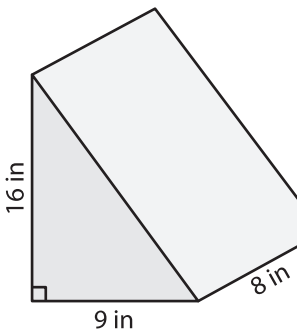


3)



Volume = _____

4)



Volume = _____

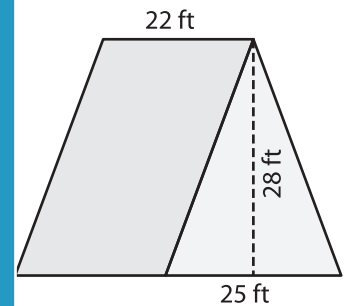
PREVIEW

Gain complete access to the largest collection of worksheets in all subjects!

Members, please log in to download this worksheet.

Not a member? Please sign up to gain complete access.

www.mathworksheets4kids.com



Volume = _____

7) A rectangular prism has a volume of 1,200 cubic inches and a height of 27 inches. What is the length of the prism?

Volume = _____

8) The diameter of a cylinder is 26 yards. Find the volume of the cylinder, if its height is 29 yards. (use $\pi = 3.14$)