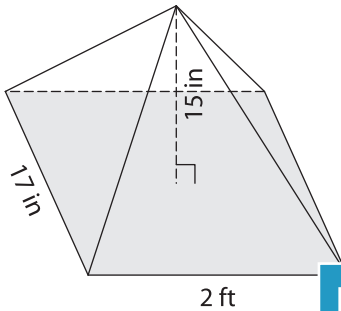


Name : _____

Volume - Rectangular Pyramid

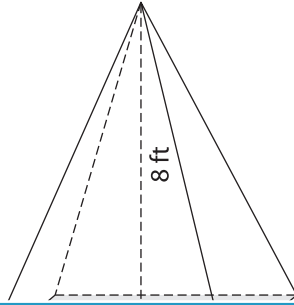
A) Find the volume of each rectangular pyramid. Round your answer to two decimal places.

1)

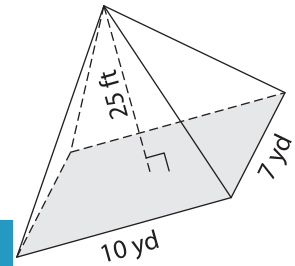


Volume = _____

2)



3)



Volume = _____ yd³

B) Find the volume of each rectangular pyramid. Round your answer to two decimal places.

4) width = 25 in ; height = 27 in

Volume = _____

6) height = 18 in ; length = 5 ft ; width = 3 ft

Volume = _____ yd³

PREVIEW

Gain complete access to the largest collection of worksheets in all subjects!

Members, please log in to download this worksheet.

Not a member? Please sign up to gain complete access.

www.mathworksheets4kids.com

5) length = 12 ft ; width = 9 ft ; height = 13 yd

Volume = _____ yd³

Volume = _____ ft³

7) length = 11 yd ; height = 26 yd ; width = 4 yd

Volume = _____ yd³

8) The length, width and height of a rectangular pyramid are 27 inches, 1 foot and 29 inches respectively. What is the volume of the rectangular pyramid in cubic inches?
