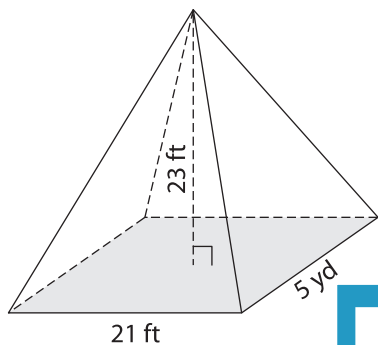


Volume - Rectangular Pyramid

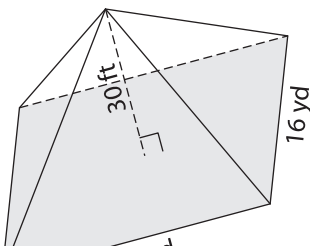
A) Find the volume of each rectangular pyramid. Round your answer to two decimal places.

1)

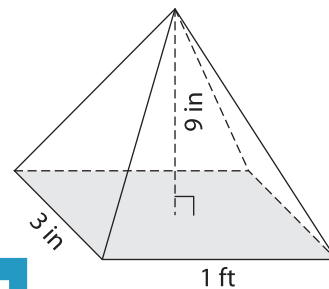


Volume = _____

2)



3)



Volume = _____ in³

B) Find the volume of each rectangular pyramid. Round your answer to two decimal places.

4) length = 6 ft ; width = 24 ft ; height = 10 ft

Volume = _____

6) width = 17 in ; height = 24 in ; length = 10 ft

Volume = _____ in³

5) length = 23 ft ; width = 7 yd ; height = 10 ft

Volume = _____ yd³

7) length = 10 ft ; width = 19 in ; height = 10 ft

Volume = _____ ft³

PREVIEW

Gain complete access to the largest collection of worksheets in all subjects!

Members, please log in to download this worksheet.

Not a member? Please sign up to gain complete access.

www.mathworksheets4kids.com

8) A rectangular pyramid has a length of 13 yards, a width of 8 yards and a height of 24 inches. Find the volume of the pyramid in cubic yards. Round your answer to two decimal places.
