

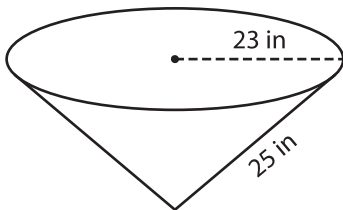
Name : _____

Volume - Cone

Sheet 1

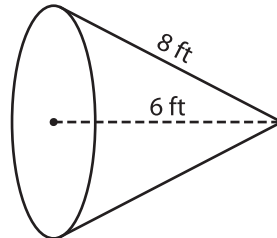
A) Find the volume of each cone. Round your answer to two decimal places.
(use $\pi = 3.14$)

1)



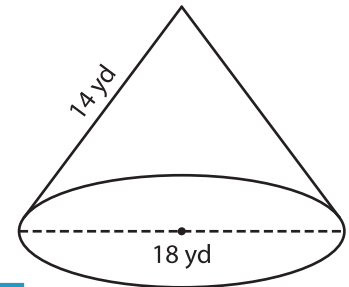
Volume = _____

2)



Volume = _____

3)



Volume = _____

B) Find the volume of each cone. Round your answer to two decimal places.

4) slant height = 23 in ; radius = 12 in

Volume = _____

6) diameter = 22 yd ; slant height = 15 yd

Volume = _____

PREVIEW
Gain complete access to the largest collection of worksheets in all subjects!

Members, please log in to download this worksheet.

Not a member? Please sign up to gain complete access.

www.mathworksheets4kids.com

5) radius = 10 in ; slant height = 21 ft

Volume = _____

Volume = _____

8) The height and slant height of a steel cone are 10 inches and 15 inches respectively. What is the volume of the cone? Round your answer to two decimal places. (use $\pi = 3.14$)

