

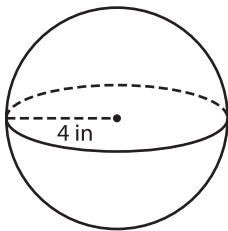
Name : _____

Volume - Spheres

Integers: ES1

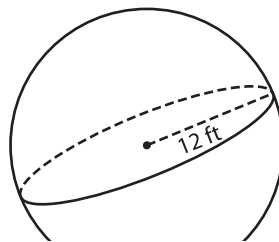
A) Find the volume of each sphere. Round your answer to two decimal places. (use $\pi = 3.14$)

1)



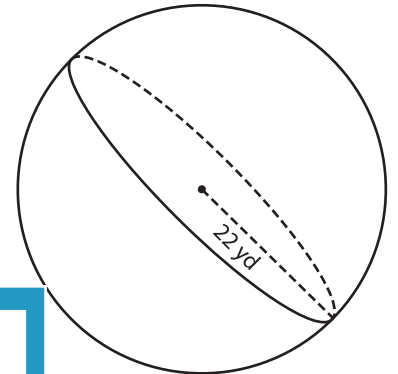
Volume = _____

2)



Volume = _____

3)



Volume = _____

B) Find the volume of a sphere with a radius of 7 in. Round your answer to two decimal places.

4) radius = 7 in

Volume = _____

6) radius = 15 ft

Volume = _____

Find the volume of a sphere with a radius of 23 ft. Round your answer to two decimal places.

Volume = _____

PREVIEW

Gain complete access to the largest collection of worksheets in all subjects!

Members, please log in to download this worksheet.

Not a member? Please sign up to gain complete access.

www.mathworksheets4kids.com

8) Find the volume of a sphere whose radius is 23 feet. Round your answer to two decimal places. (use $\pi = 3.14$)
