

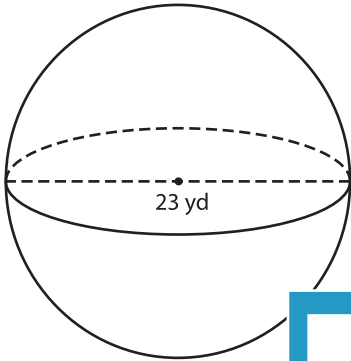
Name : \_\_\_\_\_

## Volume - Spheres

Integers: MS2

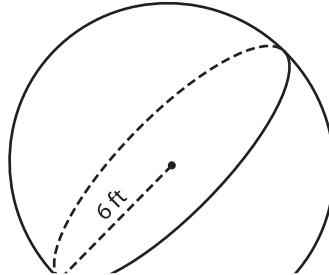
A) Find the volume of each sphere. Round your answer to two decimal places.  
(use  $\pi = 3.14$ )

1)



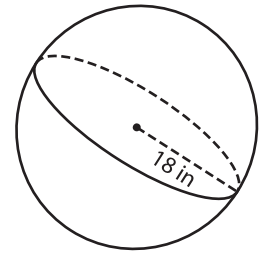
Volume = \_\_\_\_\_

2)



Volume = \_\_\_\_\_

3)



B) Find the volume of each sphere. Round your answer to two decimal places.

4) radius = 8 ft

Volume = \_\_\_\_\_

6) radius = 16 in

Volume = \_\_\_\_\_

Volume = \_\_\_\_\_

8) Determine the volume of a sphere whose diameter is 21 yards. (use  $\pi = 3.14$ )

\_\_\_\_\_

**PREVIEW**

Gain complete access to the largest collection of worksheets in all subjects!

Members, please log in to download this worksheet.

Not a member? Please sign up to gain complete access.

[www.mathworksheets4kids.com](http://www.mathworksheets4kids.com)