

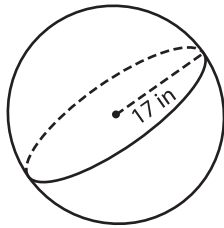
Name : _____

Volume - Spheres

Integers: MS3

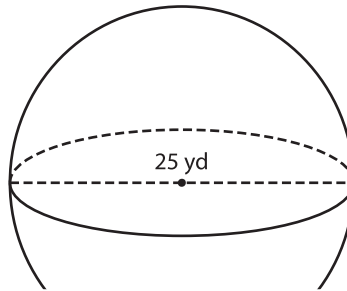
A) Find the volume of each sphere. Round your answer to two decimal places.
(use $\pi = 3.14$)

1)



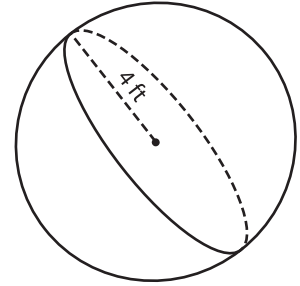
Volume = _____

2)



Volume = _____

3)



Volume = _____

B) Find the volume of each sphere. Round your answer to two decimal places.

4) diameter = 27 yd

Volume = _____

6) radius = 26 ft

Volume = _____

PREVIEW

Gain complete access to the largest collection of worksheets in all subjects!

Members, please log in to download this worksheet.

Not a member? Please sign up to gain complete access.

www.mathworksheets4kids.com

Volume = _____

8) The diameter of a sphere is 6 inches. Find the volume of the sphere. (use $\pi = 3.14$)
