

# Number Line Addition

0-5: S5

Read each number line and solve the problem.



$$3 + 1 = \square$$



# PREVIEW

Gain complete access to the largest  
collection of worksheets in all subjects!


Members, please  
log in to  
download this  
worksheet.

Not a member?  
Please sign up to  
gain complete  
access.

[www.mathworksheets4kids.com](http://www.mathworksheets4kids.com)



$$0 + 5 = \square$$

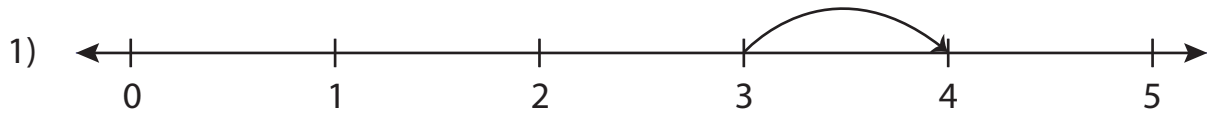


$$3 + 2 = \square$$

**Number Line Addition**

0-5: S5

Read each number line and solve the problem.



$$3 + 1 = \boxed{4}$$



# PREVIEW

Gain complete access to the largest  
collection of worksheets in all subjects!


Members, please  
log in to  
download this  
worksheet.

Not a member?  
Please sign up to  
gain complete  
access.

[www.mathworksheets4kids.com](http://www.mathworksheets4kids.com)



$$0 + 5 = \boxed{5}$$



$$3 + 2 = \boxed{5}$$