


Name : _____

Tall vs Short

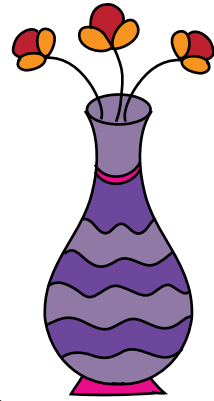
Sheet 1

Tick the tallest object and cross out the shortest object in each question.

1)



2)






PREVIEW

Gain complete access to the largest collection of worksheets in all subjects!

Members, please log in to download this worksheet.

Not a member? Please sign up to gain complete access.

www.mathworksheets4kids.com



Name : _____

Answer Key

Tall vs Short

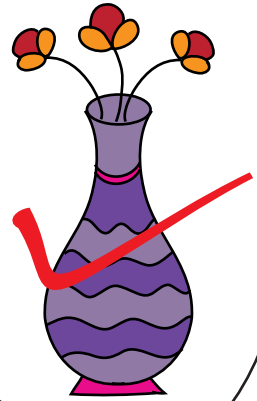
Sheet 1

Tick the tallest object and cross out the shortest object in each question.

1)



2)



PREVIEW

Gain complete access to the largest collection of worksheets in all subjects!

Members, please log in to download this worksheet.

Not a member? Please sign up to gain complete access.

www.mathworksheets4kids.com

