

Name : _____

Tall vs Short



Sheet 2

Tick the tallest object and cross out the shortest object in each question.

1)



2)





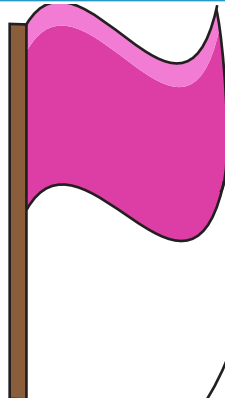

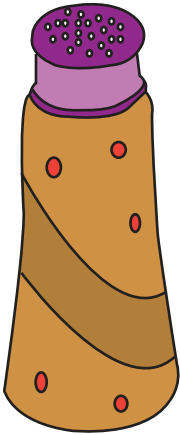
PREVIEW

Gain complete access to the largest collection of worksheets in all subjects!

Members, please log in to download this worksheet.

Not a member? Please sign up to gain complete access.

www.mathworksheets4kids.com



Name : _____


Answer Key

Tall vs Short

Sheet 2

Tick the tallest object and cross out the shortest object in each question.

1)



2)



PREVIEW

Gain complete access to the largest collection of worksheets in all subjects!

Members, please log in to download this worksheet.

Not a member? Please sign up to gain complete access.

www.mathworksheets4kids.com

