




Bundles of Tens and Ones

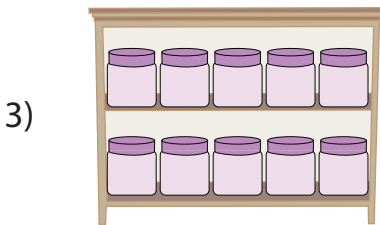
A) Count the number of objects in each set, and write how many in all.



1 ten + _____ ones = _____



1 ten + _____ ones = _____



PREVIEW

Gain complete access to the largest collection of worksheets in all subjects!

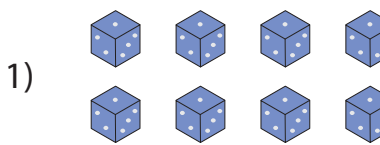
Members, please log in to download this worksheet.

Not a member? Please sign up to gain complete access.

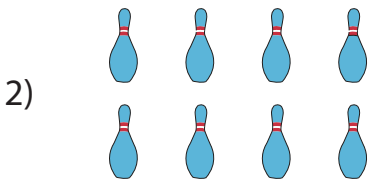
www.mathworksheets4kids.com

_____ ones = _____


B) Circle a group of ten



_____ ten + _____ ones





_____ = _____ ten + _____ ones




_____ = _____ ten + _____ ones

Bundles of Tens and Ones


A) Count the number of objects in each set, and write how many in all.



1) 1 ten + 9 ones = 19



2) 1 ten + 4 ones = 14



PREVIEW

Gain complete access to the largest collection of worksheets in all subjects!

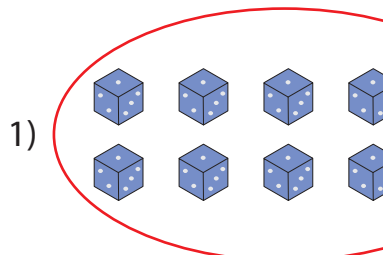
Members, please log in to download this worksheet.

Not a member? Please sign up to gain complete access.

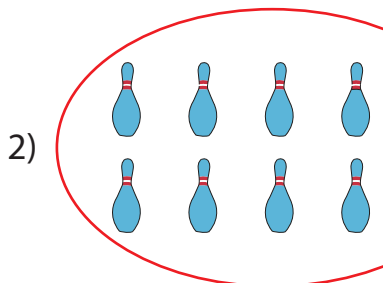
www.mathworksheets4kids.com

6 ones = 16

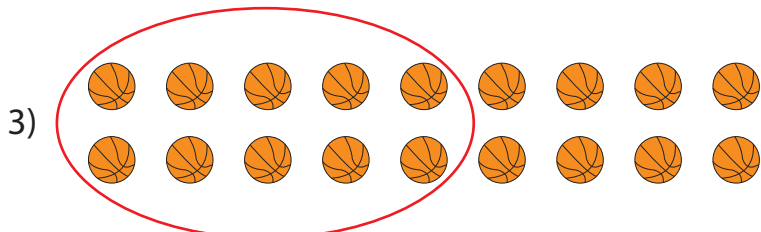
B) Circle a group of ten



1) 4 ten + 1 ones



2) 15 = 1 ten + 5 ones



3) 18 = 1 ten + 8 ones