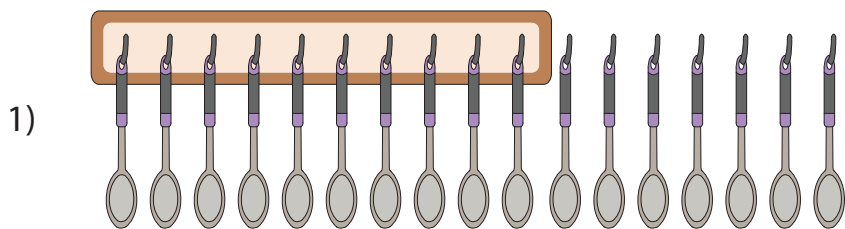


Bundles of Tens and Ones


A) Count the number of objects in each set, and write how many in all.



1 ten + _____ ones = _____




1 ten + _____ ones = _____




_____ ones = _____


B) Circle a group of ten



_____ ten + _____ ones



_____ = _____ ten + _____ ones



_____ = _____ ten + _____ ones

PREVIEW

Gain complete access to the largest collection of worksheets in all subjects!

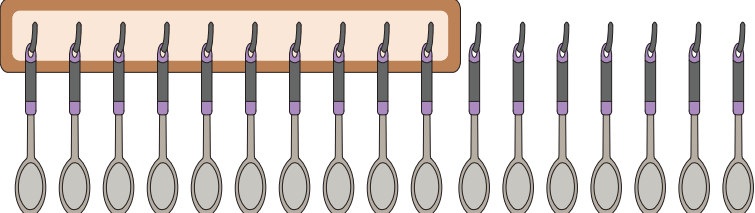
Members, please log in to download this worksheet.


Not a member? Please sign up to gain complete access.

www.mathworksheets4kids.com

Bundles of Tens and Ones

A) Count the number of objects in each set, and write how many in all.

1)  1 ten + 7 ones = 17

2)  1 ten + 3 ones = 13

3)  2 ones = 12

PREVIEW

Gain complete access to the largest collection of worksheets in all subjects!

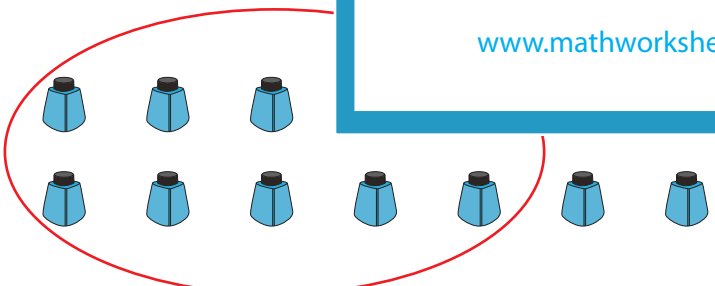
Members, please log in to download this worksheet.

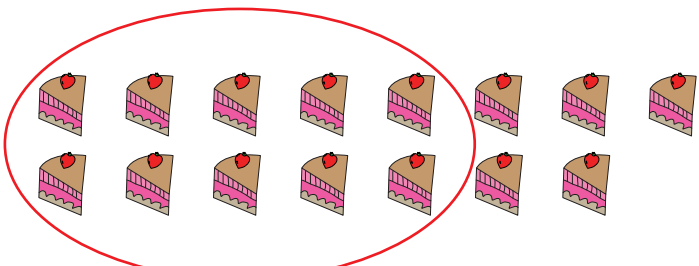
Not a member? Please sign up to gain complete access.

www.mathworksheets4kids.com

B) Circle a group of ten

1)  _____ ten + 0 ones

2)  14 = 1 ten + 4 ones

3)  15 = 1 ten + 5 ones