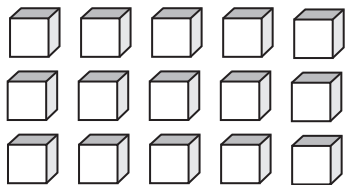


**Counting Units**

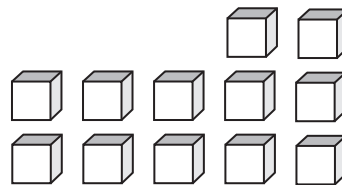
Write the number formed by base ten blocks

1)



\_\_\_\_\_

2)

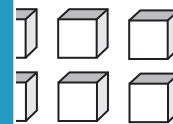


\_\_\_\_\_

3)

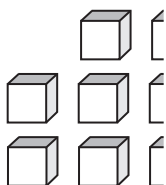


\_\_\_\_\_

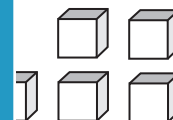


\_\_\_\_\_

5)



\_\_\_\_\_



\_\_\_\_\_

# PREVIEW

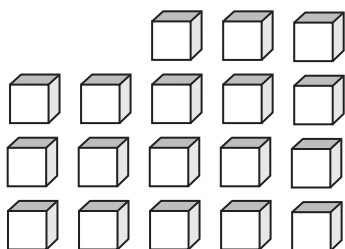
Gain complete access to the largest collection of worksheets in all subjects!

Members, please log in to download this worksheet.

Not a member? Please sign up to gain complete access.

www.mathworksheets4kids.com

7)



\_\_\_\_\_

8)



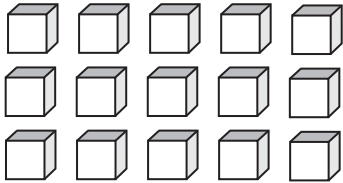
\_\_\_\_\_

**Answer key****Counting Units**

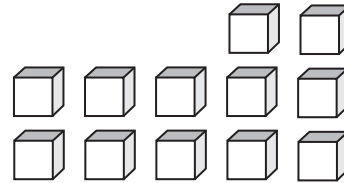
Sheet 2

Write the number formed by base ten blocks

1)

15

2)

12

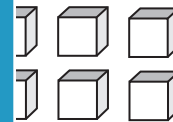
3)

1**PREVIEW**

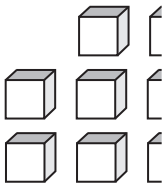
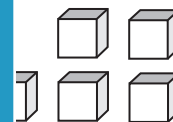
Gain complete access to the largest collection of worksheets in all subjects!

Members, please log in to download this worksheet.

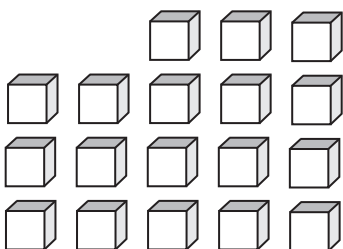
Not a member? Please sign up to gain complete access.

[www.mathworksheets4kids.com](http://www.mathworksheets4kids.com)6

5)

75

7)

18

8)

2